



Cambridge IGCSE™

CANDIDATE
NAME

--

CENTER
NUMBER

--	--	--	--	--

CANDIDATE
NUMBER

--	--	--	--



MATHEMATICS (US)

0444/21

Paper 2 (Extended)

May/June 2020

1 hour 30 minutes

You must answer on the question paper.

You will need: Geometrical instruments

INSTRUCTIONS

- Answer **all** questions.
- Use a black or dark blue pen. You may use an HB pencil for any diagrams or graphs.
- Write your name, center number and candidate number in the boxes at the top of the page.
- Write your answer to each question in the space provided.
- Do **not** use an erasable pen or correction fluid.
- Do **not** write on any bar codes.
- Calculators must **not** be used in this paper.
- You may use tracing paper.
- You must show all necessary work clearly.
- All answers should be given in their simplest form.

INFORMATION

- The total mark for this paper is 70.
- The number of marks for each question or part question is shown in parentheses [].

This document has **16** pages. Blank pages are indicated.

Formula List

For the equation

$$ax^2 + bx + c = 0$$

$$x = \frac{-b \pm \sqrt{b^2 - 4ac}}{2a}$$

Lateral surface area, A , of cylinder of radius r , height h .

$$A = 2\pi rh$$

Lateral surface area, A , of cone of radius r , sloping edge l .

$$A = \pi rl$$

Surface area, A , of sphere of radius r .

$$A = 4\pi r^2$$

Volume, V , of pyramid, base area A , height h .

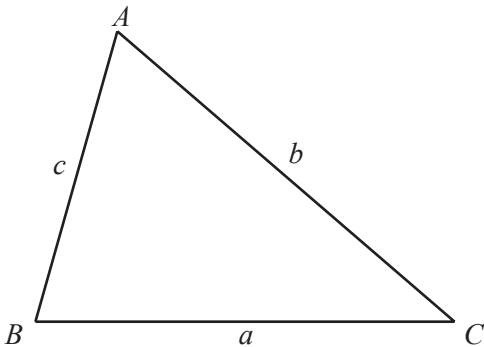
$$V = \frac{1}{3}Ah$$

Volume, V , of cone of radius r , height h .

$$V = \frac{1}{3}\pi r^2 h$$

Volume, V , of sphere of radius r .

$$V = \frac{4}{3}\pi r^3$$

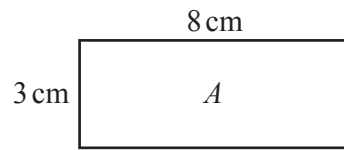


$$\frac{a}{\sin A} = \frac{b}{\sin B} = \frac{c}{\sin C}$$

$$a^2 = b^2 + c^2 - 2bc \cos A$$

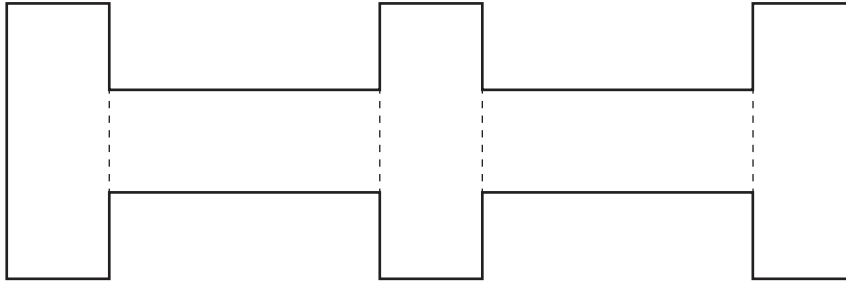
$$\text{Area} = \frac{1}{2}bc \sin A$$

- 1 Rectangle A measures 3 cm by 8 cm.



NOT TO
SCALE

Five rectangles congruent to A are joined to make a shape.



NOT TO
SCALE

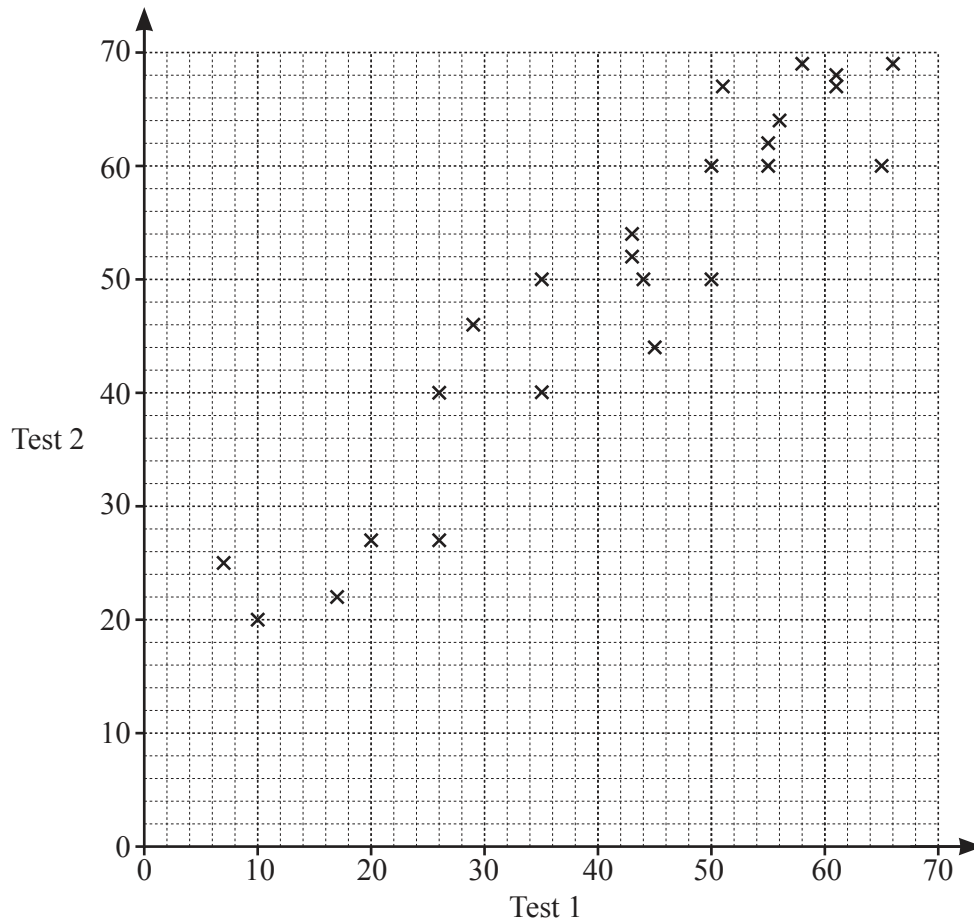
Work out the perimeter of this shape.

..... cm [2]

- 2 Find the highest **odd** number that is a factor of 60 and a factor of 90.

..... [1]

- 3 Mrs Salaman gives her class two mathematics tests.
The scatter diagram shows information about the marks each student scored.



- (a) Write down the highest mark scored on test 1.
..... [1]
- (b) Write down the type of correlation shown in the scatter diagram.
..... [1]
- (c) Draw a line of best fit on the scatter diagram. [1]
- (d) Hamish scored a mark of 40 on test 1.
He was absent for test 2.

Use your line of best fit to find an estimate for his mark on test 2.

..... [1]

- 4 A bag contains blue, red, yellow, and green balls only.
A ball is taken from the bag at random.
The table shows some information about the probabilities.

Color	Blue	Red	Yellow	Green
Probability	0.15	0.2		0.43

- (a) Complete the table.

[2]

- (b) Abdul takes a ball at random and replaces it in the bag.
He does this 200 times.

Find how many times he expects to take a red ball.

..... [1]

- 5 (a) The n th term of a sequence is $60 - 8n$.

Find the largest number in this sequence.

..... [1]

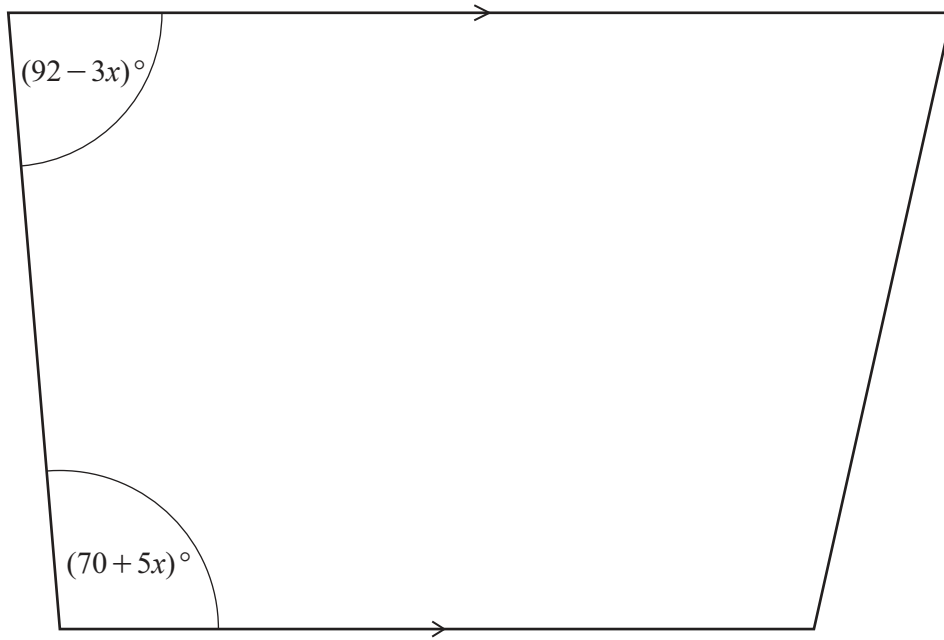
- (b) Here are the first five terms of a different sequence.

12 19 26 33 40

Find an expression for the n th term of this sequence.

..... [2]

6 The diagram shows a trapezoid.



NOT TO
SCALE

Work out the value of x .

$x = \dots\dots\dots$ [3]

7 $234 = 2 \times 3^2 \times 13$ $1872 = 2^4 \times 3^2 \times 13$ $234 \times 1872 = 438\,048$

Use this information to write 438 048 as a product of its prime factors.

$\dots\dots\dots$ [1]

8 Work out $\left(2\frac{1}{3} - \frac{7}{8}\right) \times \frac{6}{25}$.

Give your answer as a fraction in its simplest form.

..... [4]

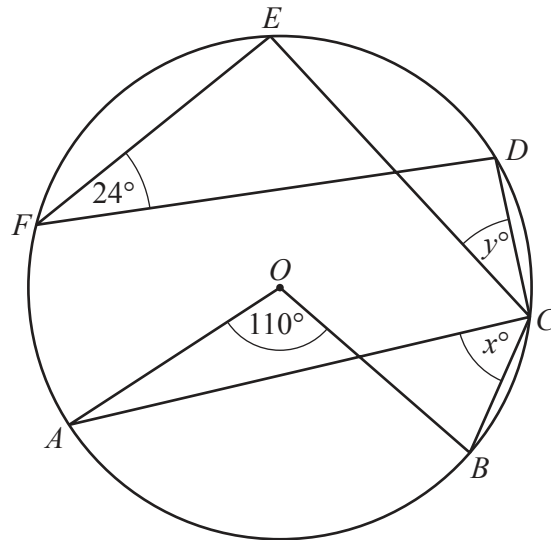
9 Factor completely.

(a) $21a^2 + 28ab$

..... [2]

(b) $20x^2 - 45y^2$

..... [3]



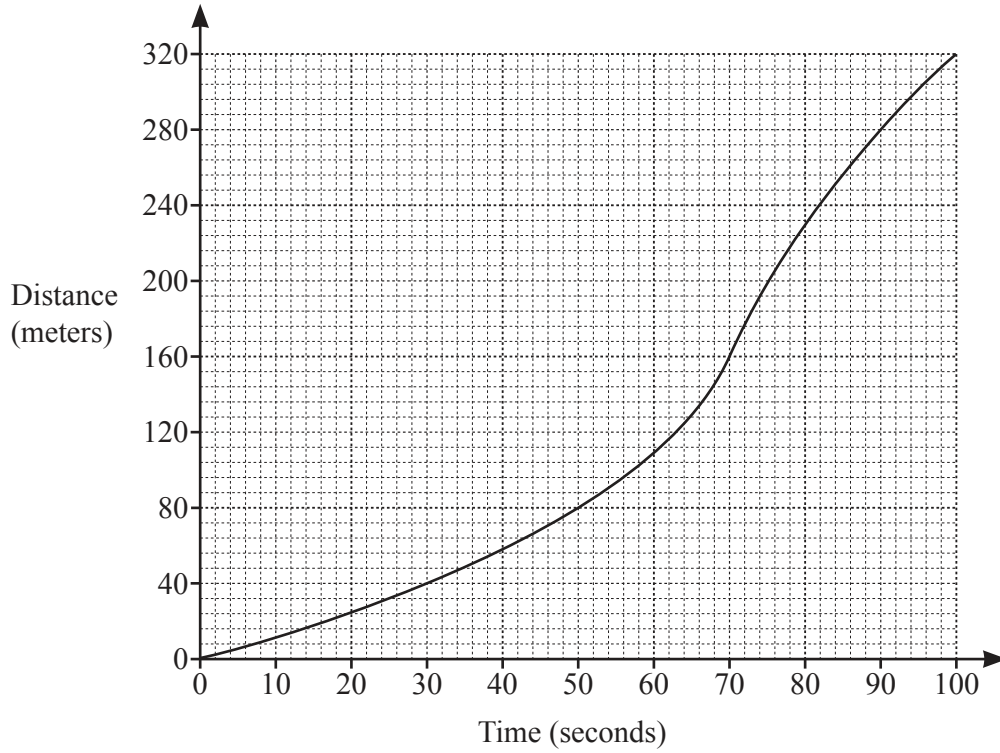
NOT TO
SCALE

Points A, B, C, D, E and F lie on the circle, center O .

Find the value of x and the value of y .

$x = \dots\dots\dots$

$y = \dots\dots\dots$ [2]



The diagram shows the distance traveled by a cyclist during the first 100 seconds of her journey.

(a) Work out her average speed.

..... m/s [1]

(b) Find an estimate of the speed of the cyclist 60 seconds after she started.

..... m/s [3]

12 19 11 13 10 12 19 14 15 19 13

The list shows 10 test scores.

Find

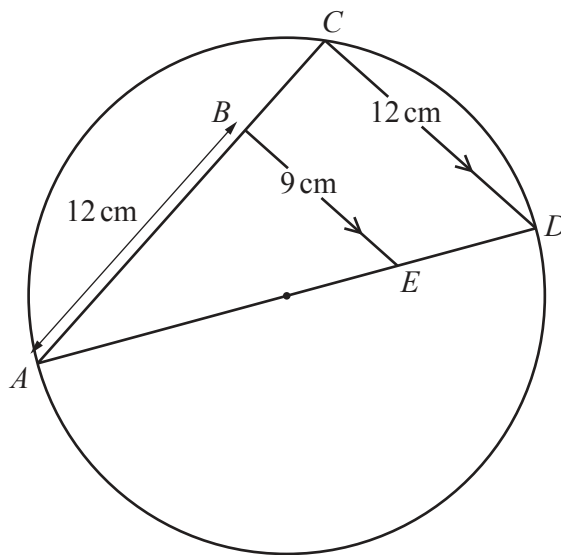
(a) the mode,

..... [1]

(b) the median.

..... [2]

13



NOT TO SCALE

C lies on a circle with diameter AD .
 B lies on AC and E lies on AD such that BE is parallel to CD .
 $AB = 12$ cm, $CD = 12$ cm and $BE = 9$ cm.

Work out the radius of the circle.

..... cm [5]

14 (a) $f(x) = 4x + 3$ $g(x) = 5x - 4$

$$f(g(x)) = 20x + p$$

Find the value of p .

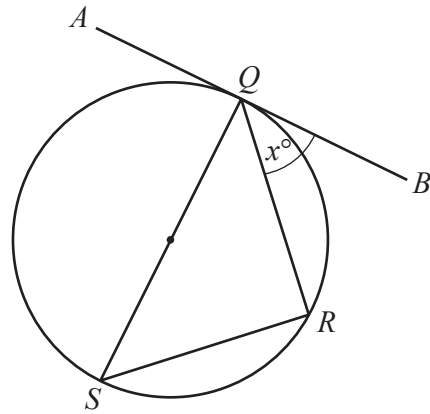
$$p = \dots\dots\dots [2]$$

(b) $h(x) = \frac{5x-1}{3}$

Find $h^{-1}(x)$.

$$h^{-1}(x) = \dots\dots\dots [3]$$

15



NOT TO SCALE

Q , R and S are points on the circle.
 QS is a diameter.
 AB is a tangent to the circle at Q .
 Angle $BQR = x^\circ$.

Show that angle $QSR = x^\circ$.
 Give a reason for each step of your work.

.....

.....

..... [3]

16 m varies inversely as the square of $(p - 1)$.
 When $p = 4$, $m = 5$.

Find m when $p = 2$.

$m = \dots\dots\dots$ [3]

17 (a) (i) $\mathbf{m} = \begin{pmatrix} 5 \\ 7 \end{pmatrix}$

Find $3\mathbf{m}$.

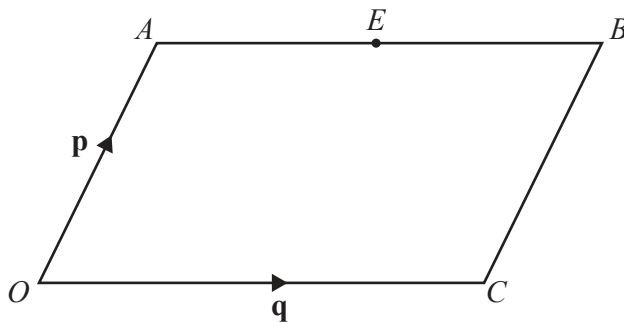
$\begin{pmatrix} \\ \end{pmatrix}$ [1]

(ii) The magnitude of the vector $\begin{pmatrix} p \\ 12 \end{pmatrix}$ is 13.

Find the positive value of p .

$p = \dots\dots\dots$ [2]

(b)



NOT TO SCALE

$OACB$ is a parallelogram.

$\vec{OA} = \mathbf{p}$ and $\vec{OC} = \mathbf{q}$.

E is the midpoint of AB .

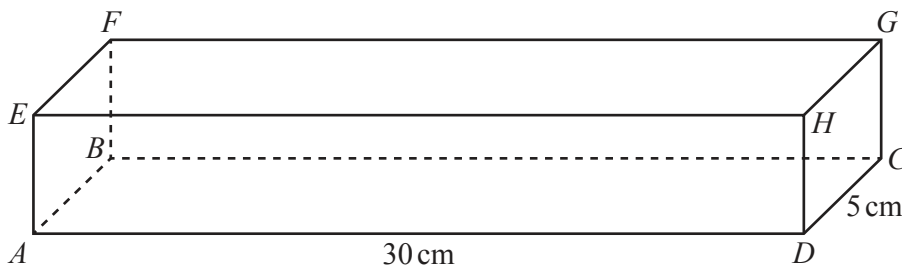
Find \vec{OE} in terms of \mathbf{p} and \mathbf{q} .

$\vec{OE} = \dots\dots\dots$ [2]

18 Simplify $\sqrt{250} + \sqrt{40}$.

..... [2]

19



NOT TO SCALE

The diagram shows a solid cuboid $ABCDEFGH$ of length 30 cm and width 5 cm. The volume of the cuboid is 600 cm^3 .

Find the total surface area of the cuboid.

..... cm^2 [4]

20 Simplify. $\frac{x - 8 - ax + 8a}{x^2 - 15x + 56}$

..... [5]

21 The area of a regular hexagon with side length 8 cm is $k\sqrt{3}$ cm².

Find the value of k .

$k =$ [3]

BLANK PAGE

Permission to reproduce items where third-party owned material protected by copyright is included has been sought and cleared where possible. Every reasonable effort has been made by the publisher (UCLES) to trace copyright holders, but if any items requiring clearance have unwittingly been included, the publisher will be pleased to make amends at the earliest possible opportunity.

To avoid the issue of disclosure of answer-related information to candidates, all copyright acknowledgements are reproduced online in the Cambridge Assessment International Education Copyright Acknowledgements Booklet. This is produced for each series of examinations and is freely available to download at www.cambridgeinternational.org after the live examination series.

Cambridge Assessment International Education is part of the Cambridge Assessment Group. Cambridge Assessment is the brand name of the University of Cambridge Local Examinations Syndicate (UCLES), which itself is a department of the University of Cambridge.