

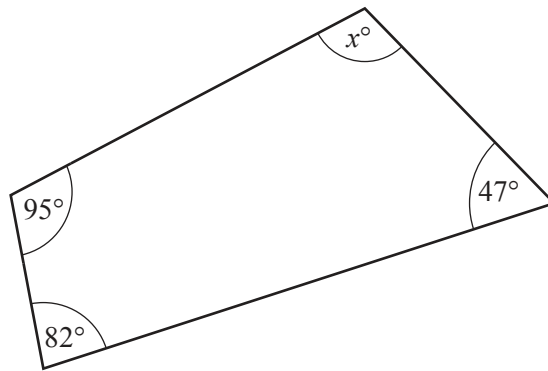
- 1 Write 4647 correct to the nearest 100.

..... [1]

- 2 Write 0.007 as a fraction.

..... [1]

- 3 The diagram shows a quadrilateral.



NOT TO
SCALE

Find the value of x .

$x =$ [1]

- 4 The n th term of a sequence is $5n - 3$.

Write down the first three terms of the sequence.

.....,, [1]

- 5 (a) Write 0.002 68 correct to 2 significant figures.

..... [1]

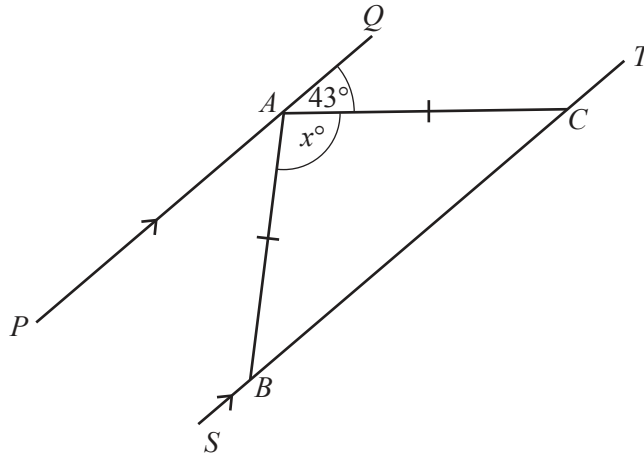
- (b) Write 0.000 038 7 in standard form.

..... [1]

6 Find the value of $7x + 3y$ when $x = 12$ and $y = -6$.

..... [2]

7



NOT TO SCALE

The diagram shows two parallel lines PAQ and $SBCT$.
 $AB = AC$ and angle $QAC = 43^\circ$.

Find the value of x .

$x =$ [2]

8 Solve the equation $8x - 5 = 7$.

$x =$ [2]

- 9 (a) Change 6.54 kilometres into metres.

..... m [1]

- (b) Change 7850 cm³ into litres.

..... litres [1]

- 10 The height, h metres, of a boy is 1.72 m, correct to the nearest centimetre.

Complete this statement about the value of h .

..... $\leq h <$ [2]

- 11 Expand and simplify.

$$6(2y - 3) - 5(y + 1)$$

..... [2]

- 12

$$\mathbf{g} = \begin{pmatrix} 2 \\ 5 \end{pmatrix} \quad \mathbf{h} = \begin{pmatrix} -3 \\ 4 \end{pmatrix}$$

Write as a single vector

- (a) $\mathbf{g} + \mathbf{h}$,

$\begin{pmatrix} \\ \end{pmatrix}$ [1]

- (b) $-\mathbf{h}$.

$\begin{pmatrix} \\ \end{pmatrix}$ [1]

13 Work out the lowest common multiple (LCM) of 18 and 21.

..... [2]

14 Work out the size of one exterior angle of a regular octagon.

..... [2]

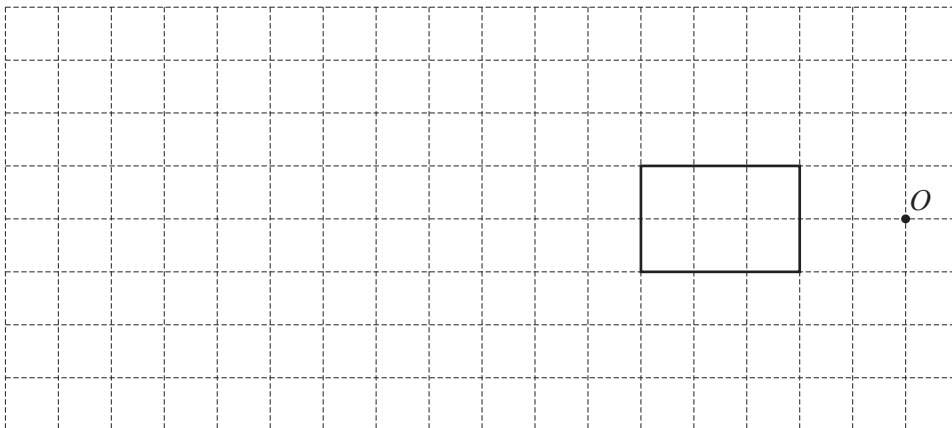
15 (a) Calculate $\sqrt{2.38 + 6.4^2}$, writing down your full calculator display.

..... [1]

(b) Write your answer to **part (a)** correct to 4 decimal places.

..... [1]

16 Enlarge the rectangle using a scale factor of 3 and centre of enlargement O .



[2]

- 17 (a) A box contains 3 blue pens, 4 red pens and 8 green pens only.
A pen is chosen at random from the box.

Find the probability that this pen is green.

..... [1]

- (b) A cube has only one of its six faces painted yellow.
This cube is rolled 240 times.

Work out the expected number of times that it lands on the yellow face.

..... [1]

- 18 (a) Simplify.

$$(x^3)^4$$

..... [1]

- (b) $4^w = \frac{1}{16}$

Find the value of w .

$w =$ [1]

- 19 π 3^{-2} $3\frac{4}{7}$ 33.3% $\sqrt{3}$ 0.3 3^{999}

From this list, write down the two numbers that are irrational.

..... , [2]

- 20 (a) Here is a description of a quadrilateral.

It has 4 right angles.

It has 2 lines of symmetry.

It has rotational symmetry of order 2.

Write down the mathematical name of this quadrilateral.

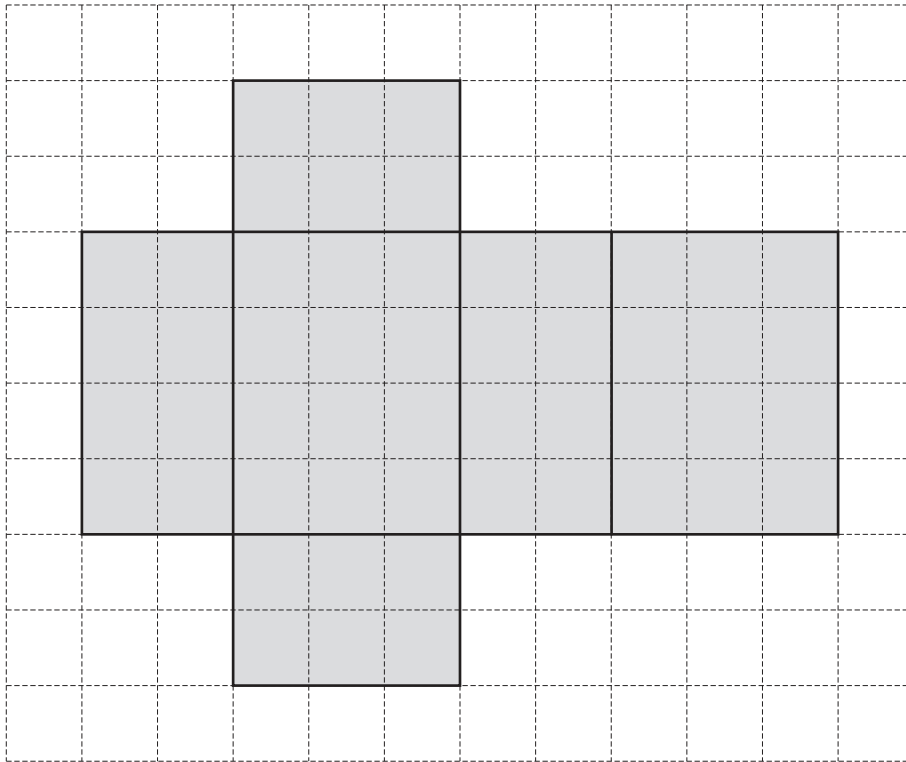
..... [1]

- (b) Write down two geometrical properties of a parallelogram.

1.

2. [2]

- 21 The net of a solid is drawn on a 1 cm^2 grid.



- (a) Write down the name of the solid made from this net.

..... [1]

- (b) Work out the volume of this solid.

..... cm^3 [2]

22 Factorise completely.

(a) $10 + 16w$

..... [1]

(b) $12tx - 8t^2$

..... [2]

23 **Without using your calculator**, work out $1\frac{3}{4} \times \frac{6}{35}$.

You must show all your working and give your answer as a fraction in its simplest form.

..... [3]

- 24 Solve the simultaneous equations.
You must show all your working.

$$\begin{aligned}3x + 10y &= 106 \\5x - 4y &= 1\end{aligned}$$

$x = \dots\dots\dots$

$y = \dots\dots\dots [4]$

- 25 40 people were asked how many times they visited the cinema in one month.
The table shows the results.

Number of cinema visits	0	1	2	3	4	5	6	7
Frequency	5	5	6	6	7	3	6	2

- (a) (i) Find the mode.

..... [1]

- (ii) Calculate the mean.

..... [3]

- (b) Omar wants to show the information from the table in a pie chart.

Calculate the sector angle for the people who visited the cinema 5 times.

..... [2]

BLANK PAGE

Permission to reproduce items where third-party owned material protected by copyright is included has been sought and cleared where possible. Every reasonable effort has been made by the publisher (UCLES) to trace copyright holders, but if any items requiring clearance have unwittingly been included, the publisher will be pleased to make amends at the earliest possible opportunity.

To avoid the issue of disclosure of answer-related information to candidates, all copyright acknowledgements are reproduced online in the Cambridge International Examinations Copyright Acknowledgements Booklet. This is produced for each series of examinations and is freely available to download at www.cie.org.uk after the live examination series.

Cambridge International Examinations is part of the Cambridge Assessment Group. Cambridge Assessment is the brand name of University of Cambridge Local Examinations Syndicate (UCLES), which is itself a department of the University of Cambridge.