



# Cambridge IGCSE™

---

**GEOGRAPHY**

**0460/43**

Paper 4 Alternative to Coursework

**May/June 2021**

INSERT

**1 hour 30 minutes**

---

## INFORMATION

- This insert contains additional resources referred to in the questions.
- You may annotate this insert and use the blank spaces for planning. **Do not write your answers** on the insert.



---

This document has **12** pages. Any blank pages are indicated.

Fig. 1.1 for Question 1

## Measuring river velocity

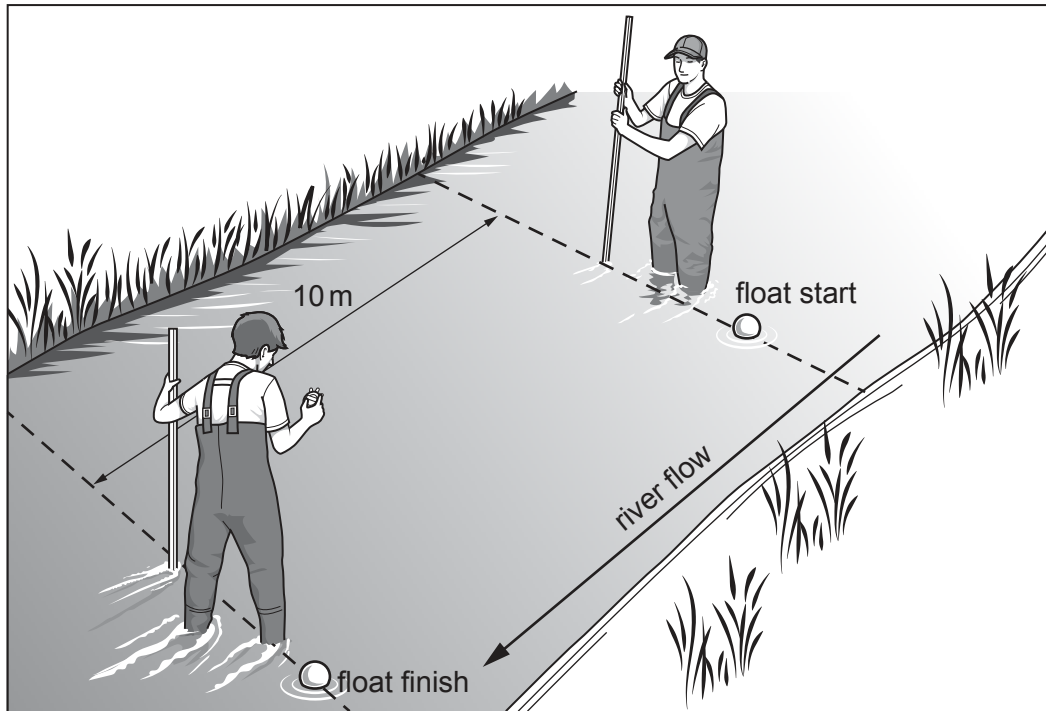


Table 1.1 for Question 1

## Results of velocity measurements

		speed of flow (m per second)			
site		left side of channel	centre of channel	right side of channel	average
upstream	1	0.65	0.73	0.90	0.76
	2	0.82	0.37	0.70	0.63
downstream	3	0.32	0.62	0.41	0.45

Fig. 1.2 for Question 1

## Measuring river width and depth



Table 1.3 for Question 1

## Width and depth measurements

	site	width (m)	average depth (m)
upstream	1	0.93	0.17
↕	2	2.00	0.23
downstream	3	3.45	0.31

Table 1.5 for Question 1

## Gradient measurements

site	angle measurement (°)			
	measurement 1	measurement 2	measurement 3	average
1	18	16	15	16.3
2	9	13	10	10.7
3	7	4	8	<b>6.3</b>



Fig. 2.1 for Question 2

The two farms

Bryn Du farm in Wales



Home Park farm in eastern England



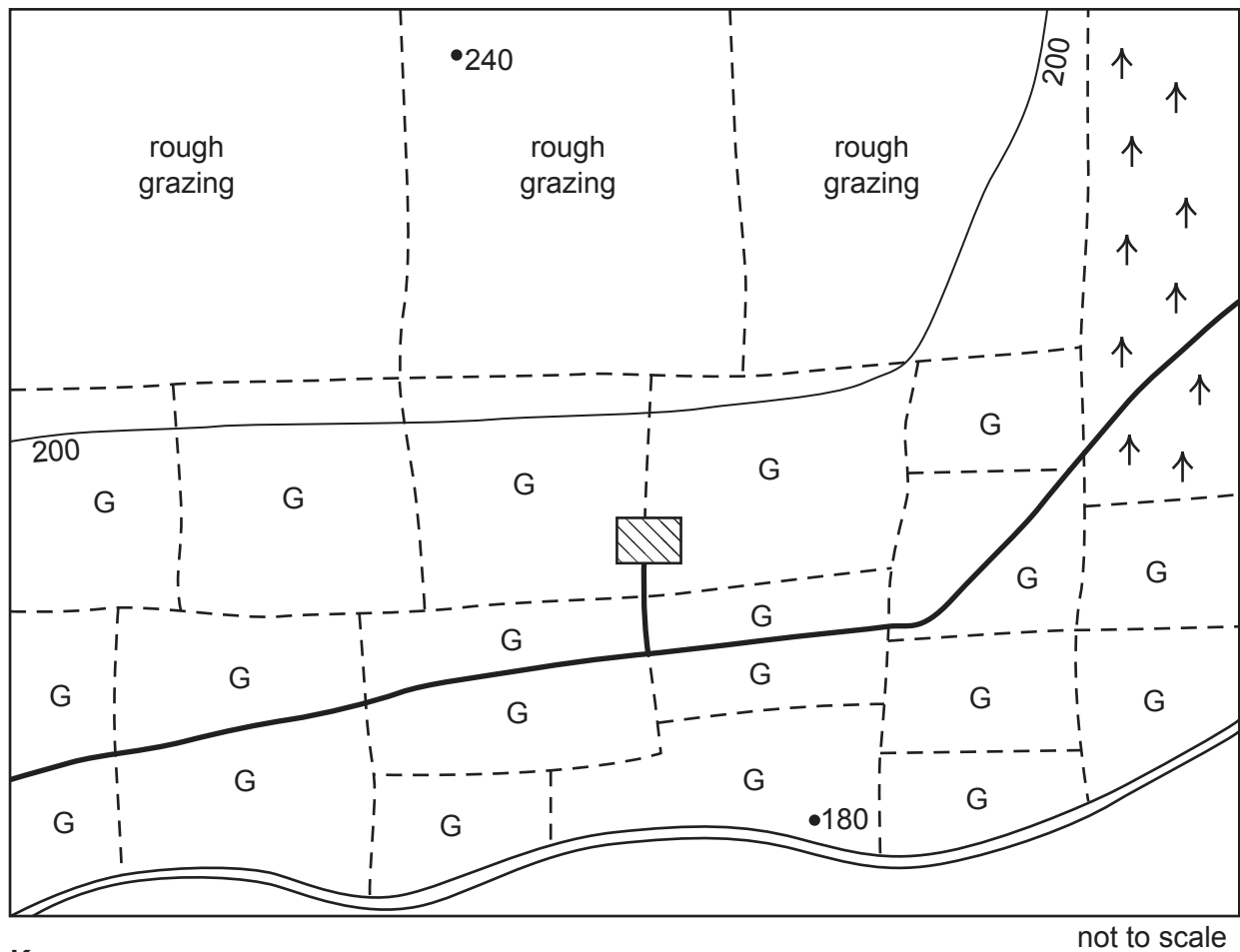
Table 2.1 for Question 2

## Climate of the local areas









	average temperature °C		annual rainfall (mm)
	January	July	
Bryn Du farm	4	16	1350
Home Park farm	5	19	550

Fig. 2.2 for Question 2

## Students' sketch map of part of Bryn Du farm



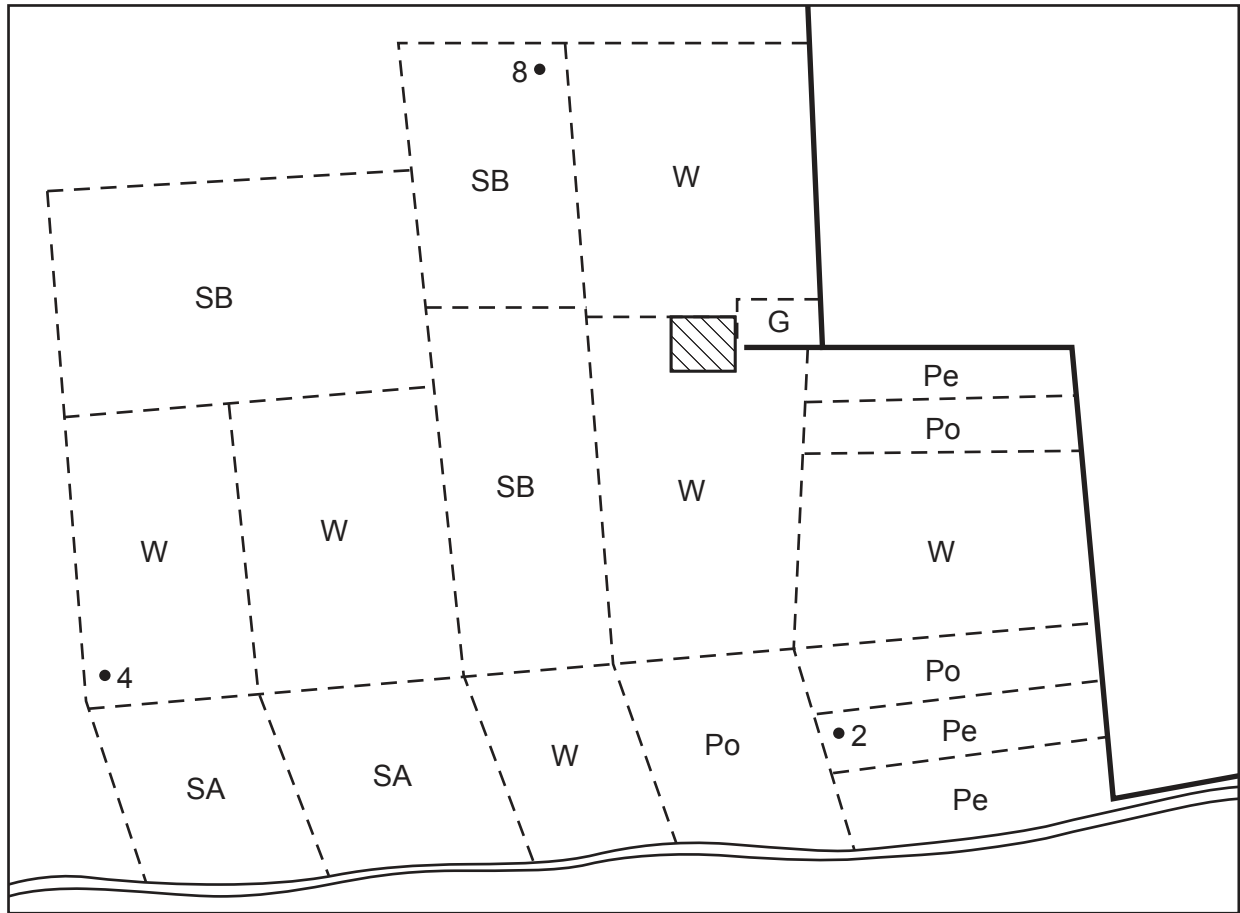
## Key

	farmhouse and farm buildings		200 contour line (metres)
	woodland		180 spot height in metres
	grassland		road
	field boundary		river

not to scale

Fig. 2.3 for Question 2

## Students' sketch map of Home Park farm



not to scale

**Key**

farmhouse and farm buildings

crops

SB sugar beet

W wheat

Pe peas

Po potatoes

• 4

spot height in metres



road



drainage channel

G

grassland

SA

set-aside

Table 2.3 for Question 2

## Land use on both farms

land use	Bryn Du farm		Home Park farm	
	hectares (ha)	percentage (%)	hectares (ha)	percentage (%)
crops	0	0	253	89
grassland	83	<b>65</b>	4	1
rough grazing	35	<b>28</b>	0	0
set-aside	0	0	28	10
woodland	9	7	0	0
total	127	100	285	100

Crops grown on Home Park farm include wheat, potatoes, sugar beet and peas.

Grassland on Bryn Du farm is used for grazing and silage (to feed the cattle and sheep).

Set-aside is land on which no crops are grown to reduce over-production.

Table 2.4 for Question 2

## Cost of inputs in both farms

input	Bryn Du farm	Home Park farm
	cost (£)	cost (£)
fertiliser	1700	18 500
pesticides	1000	22 000
food for animals	12 500	0
fuel	6600	4600
labour (workers)	<b>20 000</b>	26 000
machinery	<b>68 000</b>	142 000
total	109 800	213 100



Table 2.5 for Question 2

## Outputs from the two farms

<b>output</b>	<b>Bryn Du farm</b>
number of lambs	1100
number of young cows	40
number of bales of hay	300
number of bales of silage	700
wool	3400 kg

<b>output</b>	<b>Home Park farm</b>
wheat	1100 tonnes
sugar beet	2300 tonnes
potatoes	1050 tonnes
peas	200 tonnes





**BLANK PAGE**

---

The boundaries and names shown, the designations used and the presentation of material on any maps contained in this question paper/insert do not imply official endorsement or acceptance by Cambridge Assessment International Education concerning the legal status of any country, territory, or area or any of its authorities, or of the delimitation of its frontiers or boundaries.

Permission to reproduce items where third-party owned material protected by copyright is included has been sought and cleared where possible. Every reasonable effort has been made by the publisher (UCLES) to trace copyright holders, but if any items requiring clearance have unwittingly been included, the publisher will be pleased to make amends at the earliest possible opportunity.

To avoid the issue of disclosure of answer-related information to candidates, all copyright acknowledgements are reproduced online in the Cambridge Assessment International Education Copyright Acknowledgements Booklet. This is produced for each series of examinations and is freely available to download at [www.cambridgeinternational.org](http://www.cambridgeinternational.org) after the live examination series.

Cambridge Assessment International Education is part of the Cambridge Assessment Group. Cambridge Assessment is the brand name of the University of Cambridge Local Examinations Syndicate (UCLES), which itself is a department of the University of Cambridge.