

CANDIDATE  
NAME

CENTRE  
NUMBER

|  |  |  |  |  |
|--|--|--|--|--|
|  |  |  |  |  |
|--|--|--|--|--|

CANDIDATE  
NUMBER

|  |  |  |  |
|--|--|--|--|
|  |  |  |  |
|--|--|--|--|

\* 2 7 4 1 5 4 9 9 4 4 \*

**CHEMISTRY**

**0620/33**

Paper 3 Theory (Core)

**May/June 2019**

**1 hour 15 minutes**

Candidates answer on the Question Paper.

No Additional Materials are required.

**READ THESE INSTRUCTIONS FIRST**

Write your centre number, candidate number and name on all the work you hand in.

Write in dark blue or black pen.

You may use an HB pencil for any diagrams or graphs.

Do not use staples, paper clips, glue or correction fluid.

DO **NOT** WRITE IN ANY BARCODES.

Answer **all** questions.

Electronic calculators may be used.

A copy of the Periodic Table is printed on page 16.

You may lose marks if you do not show your working or if you do not use appropriate units.

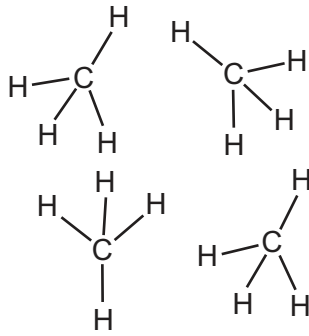
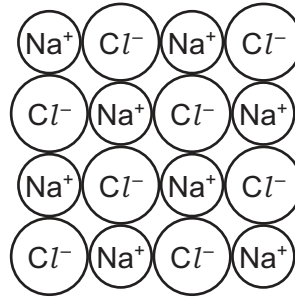
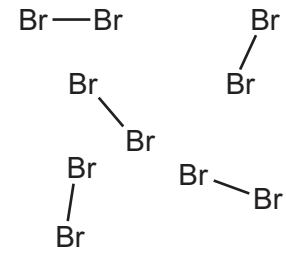
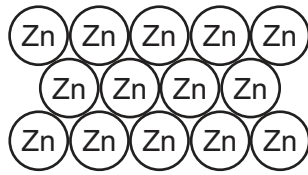
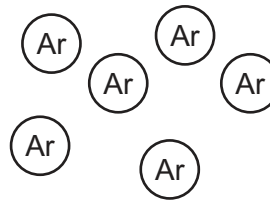
At the end of the examination, fasten all your work securely together.

The number of marks is given in brackets [ ] at the end of each question or part question.

This syllabus is regulated for use in England, Wales and Northern Ireland as a Cambridge International Level 1/Level 2 Certificate.

This document consists of **16** printed pages.

1 The diagram shows part of the structures of five substances, **A**, **B**, **C**, **D** and **E**.

**A****B****C****D****E**

(a) Answer the following questions about these structures.  
Each structure may be used once, more than once or not at all.

(i) Which **two** of these structures, **A**, **B**, **C**, **D** or **E**, are compounds?

..... and ..... [2]

(ii) Which **one** of these structures, **A**, **B**, **C**, **D** or **E**, is monatomic?

..... [1]

(iii) Which **one** of these structures, **A**, **B**, **C**, **D** or **E**, conducts electricity when solid?

..... [1]

(iv) Which **one** of these structures, **A**, **B**, **C**, **D** or **E**, is the main constituent of natural gas?

..... [1]

(v) Which **one** of these structures, **A**, **B**, **C**, **D** or **E**, is a solid which is soluble in water?

..... [1]

(vi) Which **one** of these structures, **A**, **B**, **C**, **D** or **E**, is a hydrocarbon?

..... [1]

- (b) Substance **E** is present in air.  
Air is a mixture of different gases.

Describe **two** characteristics of a mixture.

1 .....

.....

2 .....

.....

[2]

[Total: 9]

2 This question is about iron and iron compounds.

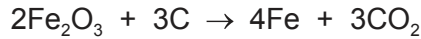
(a) Iron can be extracted from iron ore by reduction with carbon in a blast furnace.

- (i) Which **one** of these substances is an ore of iron?  
Draw a circle around the correct answer.

**bauxite**      **graphite**      **hematite**      **limestone**

[1]

(ii) The equation shows one of the reactions occurring in the blast furnace.



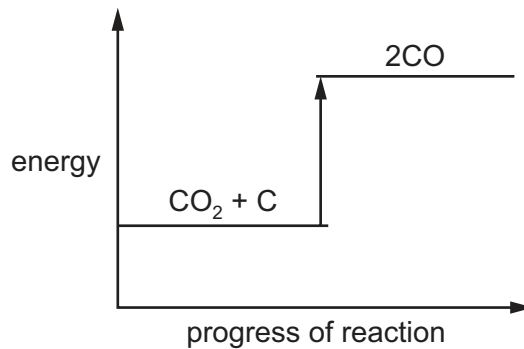
How does this equation show that  $\text{Fe}_2\text{O}_3$  is reduced?

.....  
..... [1]

(iii) The carbon dioxide formed can be reduced by carbon.



The energy level diagram for this reaction is shown.



Explain how this diagram shows that the reaction is endothermic.

.....  
..... [1]

(iv) Explain why iron is extracted by reduction with carbon and **not** by electrolysis.  
Refer to the position of iron in the reactivity series in your answer.

.....  
..... [1]

- (b) Describe **three** properties of iron that show that it is a transition element and **not** a Group I element.

1 .....

2 .....

3 .....

[3]

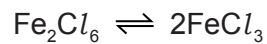
- (c) Iron reacts with chlorine to form iron(III) chloride,  $\text{Fe}_2\text{Cl}_6$ .

- (i) Balance the chemical equation for this reaction.



[2]

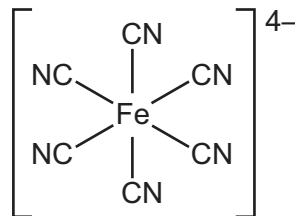
- (ii) At  $400^\circ\text{C}$   $\text{Fe}_2\text{Cl}_6$  molecules decompose.



What is meant by the symbol  $\rightleftharpoons$ ?

..... [1]

- (d) The structure of an ion is shown.



Deduce the molecular formula of this ion to show the number of iron, carbon and nitrogen atoms.

..... [1]

[Total: 11]

- 3 The table shows the percentage by mass of the elements in the oceans and in the biosphere. The biosphere is all living organisms.

| element        | percentage by mass in the oceans | percentage by mass in the biosphere |
|----------------|----------------------------------|-------------------------------------|
| calcium        | 0.05                             | 0.40                                |
| carbon         | 0.01                             | 39.00                               |
| chlorine       | 1.80                             | 0.05                                |
| hydrogen       | 11.00                            | 6.60                                |
| magnesium      | 0.12                             | 0.10                                |
| oxygen         | 85.80                            | 53.00                               |
| silicon        | 0.00                             | 0.10                                |
| sodium         | 1.15                             | 0.05                                |
| other elements | 0.07                             |                                     |
| total          | 100.00                           | 100.00                              |

(a) Answer these questions using only the information in the table.

- (i) Deduce the percentage by mass of other elements present in the biosphere.

..... % [1]

- (ii) Which metallic element is present in the oceans in the greatest percentage by mass?

..... [1]

- (iii) Give **two** major differences in the percentage by mass of the elements in the oceans and in the biosphere.

1 .....

.....

2 .....

..... [2]

(b) Living organisms respire. Water is produced during respiration.

- (i) Name the other product of respiration.

..... [1]

- (ii) Describe a chemical test for water.

test .....

observations .....

[2]

[Total: 7]

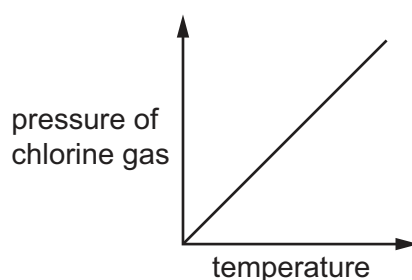
4 This question is about chlorine and compounds of chlorine.

(a) Use the kinetic particle model to describe the arrangement **and** type of motion of the molecules in:

- solid chlorine .....
- .....
- chlorine gas. ....
- .....

[4]

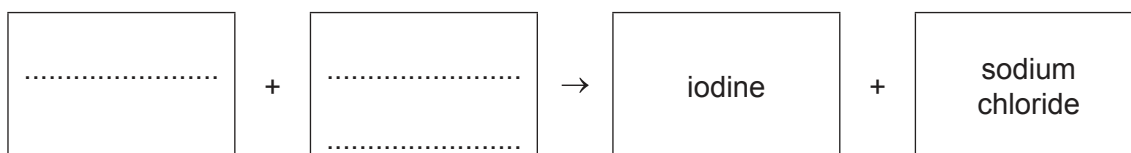
(b) The graph shows how the pressure of chlorine gas changes when temperature increases. The volume is kept constant.



Describe how the pressure of the chlorine gas changes with temperature.

.....  
 ..... [1]

(c) (i) Complete the word equation to show the halogen and halide compound which react to form the products iodine and sodium chloride.




[2]

(ii) Explain, in terms of the reactivity of the halogens, why aqueous bromine will **not** react with aqueous sodium chloride.

.....  
 ..... [1]

(d) Chlorine reacts with warm turpentine,  $C_{10}H_{16}$ .

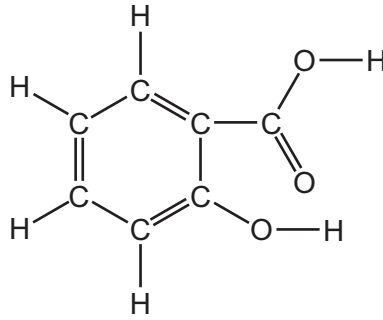
Balance the chemical equation for this reaction.



[2]

[Total: 10]

5 The structure of compound **S** is shown.



(a) (i) Draw a circle around the carboxylic acid functional group in this structure. [1]

(ii) How many different **types** of atom are shown in this structure?

..... [1]

(b) The melting point of pure **S** is 159 °C.  
The boiling point of pure **S** is 200 °C.

(i) What is the physical state of pure **S** at 100 °C?  
Explain your answer.

.....  
..... [2]

(ii) Which **one** of these statements about an impure sample of compound **S** is correct?  
Tick **one** box.

The melting point of impure **S** is 159 °C and the boiling point is above 200 °C.

The melting point of impure **S** is below 159 °C and the boiling point is 200 °C.

The melting point of impure **S** is 159 °C and the boiling point is 200 °C.

The melting point of impure **S** is below 159 °C and the boiling point is above 200 °C.

[1]

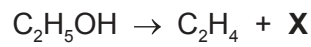


(c) Aqueous ethanoic acid has chemical properties which are typical of acids.

Describe **two** chemical properties of aqueous ethanoic acid.

- 1 .....
- .....
- 2 .....
- .....
- [2]

(d) Ethanol can be converted into ethene by passing ethanol vapour over a catalyst of aluminium oxide.



(i) Identify compound **X**.

..... [1]

(ii) Explain why a catalyst is used.

..... [1]

(iii) Draw the structure of a molecule of ethanol. Show all of the atoms and all of the bonds.

[1]

(e) Ethene can be polymerised.

(i) State the name of the polymer formed from ethene.

..... [1]

(ii) *Terylene* is also a polymer.

State **one** use of *Terylene*.

..... [1]

[Total: 12]

6 This question is about zinc and compounds of zinc.

(a) Describe how you could prepare a pure sample of crystals of hydrated zinc sulfate using dilute sulfuric acid and an excess of zinc.

.....

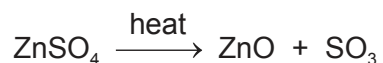
.....

.....

.....

..... [3]

(b) The equation shows the effect of heat on anhydrous zinc sulfate.



(i) What type of chemical reaction is this?

Tick **one** box.

addition

decomposition

displacement

oxidation

[1]

(ii) When 12.60 g of anhydrous zinc sulfate is heated, the mass of zinc oxide formed is 6.34 g.

Calculate the mass of zinc oxide formed when 63.0 g of anhydrous zinc sulfate is heated.

mass of zinc oxide = ..... g [1]

- (c) Complete the table to calculate the relative formula mass of anhydrous zinc sulfate,  $\text{ZnSO}_4$ . Use your Periodic Table to help you.

| type of atom | number of atoms | relative atomic mass |                    |
|--------------|-----------------|----------------------|--------------------|
| zinc         | 1               | 65                   | $1 \times 65 = 65$ |
| sulfur       |                 |                      |                    |
| oxygen       |                 |                      |                    |

relative formula mass = .....  
[2]

- (d) Complete the table to show the number of electrons, protons and neutrons in the sulfur atom and zinc ion shown.

|                              | number of electrons | number of neutrons | number of protons |
|------------------------------|---------------------|--------------------|-------------------|
| ${}^{36}_{16}\text{S}$       |                     |                    |                   |
| ${}^{67}_{30}\text{Zn}^{2+}$ |                     |                    | 30                |

[4]

- (e) An alloy contains zinc, copper and aluminium.

What is meant by the term *alloy*?

.....  
..... [1]

[Total: 12]

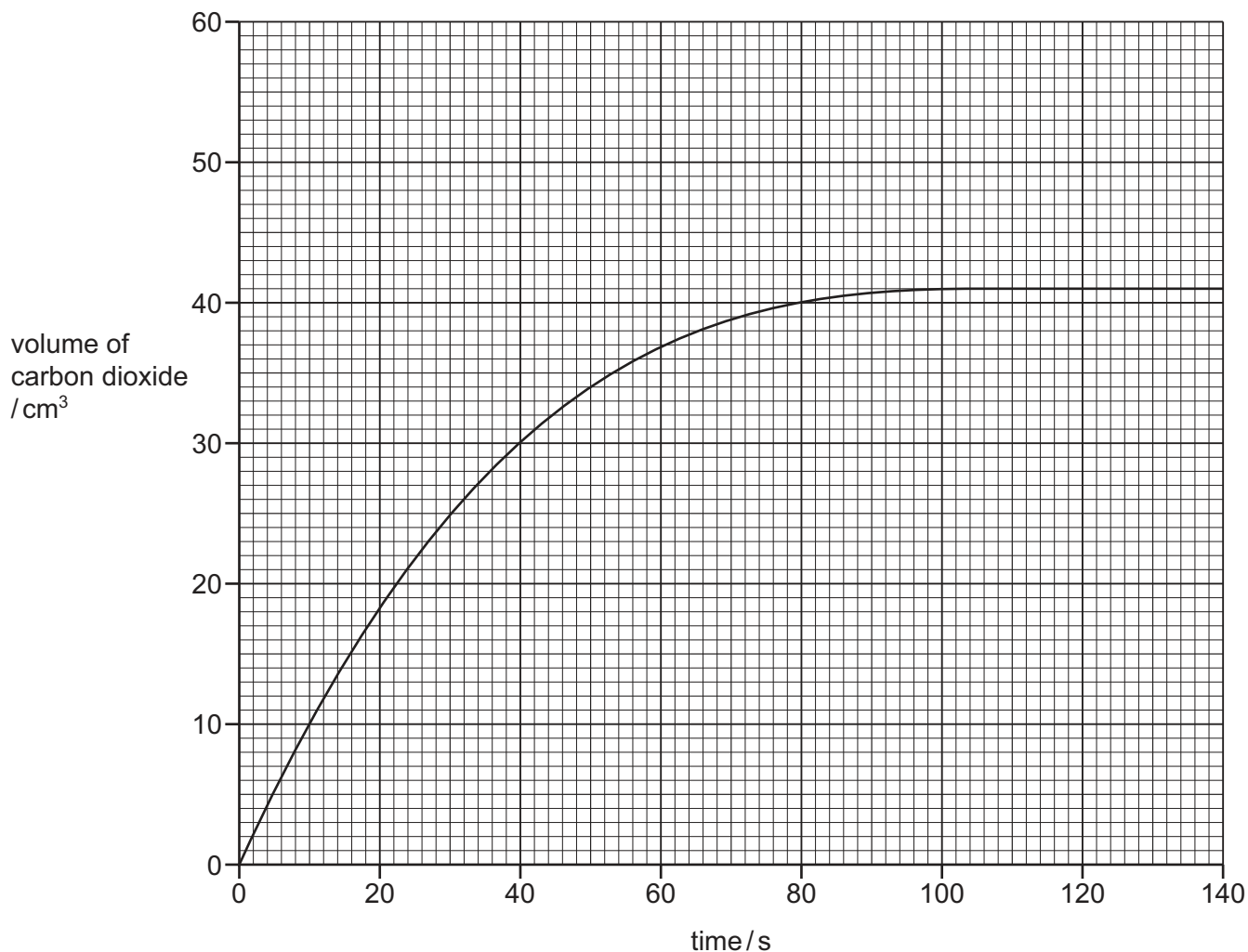
- 7 A student investigates the rate of reaction of large pieces of magnesium carbonate with an excess of dilute nitric acid.



- (a) Name the salt formed when magnesium carbonate reacts with dilute nitric acid.

..... [1]

- (b) The graph shows how the volume of carbon dioxide changes with time.



- (i) After how many seconds did the reaction finish?

..... s [1]

- (ii) From the graph, deduce the volume of carbon dioxide produced during the first 50 seconds of the experiment.

.....cm³ [1]

- (iii) The experiment is repeated using smaller pieces of the same mass of magnesium carbonate.  
All other conditions are kept the same.

Draw a line **on the grid** for the experiment using smaller pieces of magnesium carbonate. [2]

- (iv) How does increasing the temperature affect the rate of this reaction?  
All other conditions are kept the same.

..... [1]

- (v) How does decreasing the concentration of nitric acid affect the rate of this reaction?  
All other conditions are kept the same.

..... [1]

- (c) Nitric acid contains nitrate ions.

Complete these sentences about the test for nitrate ions using words from the list.

- |           |         |         |          |        |
|-----------|---------|---------|----------|--------|
| aluminium | ammonia | blue    | chloride | copper |
| green     | iron    | nitrate | oxygen   | red    |

Aqueous sodium hydroxide and ..... foil are added to the solution being tested. The mixture is warmed gently. The ..... produced turns damp ..... litmus paper .....

[3]

[Total: 10]

8 This question is about Group IV elements and their compounds.

(a) Lead compounds are pollutants in the air.

(i) State **one** source of lead compounds in the air.

..... [1]

(ii) State **one** adverse effect of lead compounds on health.

..... [1]

(b) The table shows how easy it is to reduce four metal oxides with carbon.

| metal oxide         | ease of reduction with carbon        |
|---------------------|--------------------------------------|
| bismuth(III) oxide  | reduced by carbon only above 250 °C  |
| chromium(III) oxide | reduced by carbon only above 1200 °C |
| lead(II) oxide      | reduced by carbon only above 440 °C  |
| zinc oxide          | reduced by carbon only above 990 °C  |

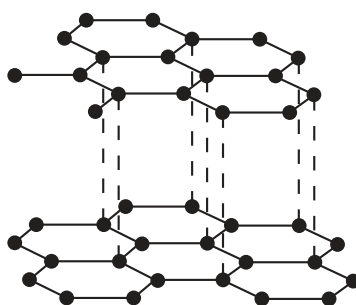
Use the information in the table to put the four metals in order of their reactivity.  
Put the least reactive metal first.

least reactive  $\longrightarrow$  most reactive

|  |  |  |  |
|--|--|--|--|
|  |  |  |  |
|--|--|--|--|

[2]

(c) Part of the structure of graphite is shown.



Use the information from the diagram to explain why graphite is used as a lubricant.

.....  
..... [1]

(d) When carbon burns in a limited supply of air, a poisonous gas is formed.

Name this gas.

..... [1]

(e) When carbon is completely burned in air, carbon dioxide is formed.  
Carbon dioxide forms a slightly acidic solution in water.

Which **one** of these pH values is the pH of a slightly acidic solution?  
Draw a circle around the correct answer.

pH 6                  pH 7                  pH 8                  pH 10

[1]

(f) Carbon dioxide is a greenhouse gas.

(i) Name **one** other major greenhouse gas.

..... [1]

(ii) State **one** effect that greenhouse gases have on the environment.

..... [1]

[Total: 9]

---

Permission to reproduce items where third-party owned material protected by copyright is included has been sought and cleared where possible. Every reasonable effort has been made by the publisher (UCLES) to trace copyright holders, but if any items requiring clearance have unwittingly been included, the publisher will be pleased to make amends at the earliest possible opportunity.

To avoid the issue of disclosure of answer-related information to candidates, all copyright acknowledgements are reproduced online in the Cambridge Assessment International Education Copyright Acknowledgements Booklet. This is produced for each series of examinations and is freely available to download at [www.cambridgeinternational.org](http://www.cambridgeinternational.org) after the live examination series.

Cambridge Assessment International Education is part of the Cambridge Assessment Group. Cambridge Assessment is the brand name of the University of Cambridge Local Examinations Syndicate (UCLES), which itself is a department of the University of Cambridge.

## The Periodic Table of Elements

|                                   |                                    | Group  |  |                                    |                                     |                                    |                                     |                                     |                                       |                                      |                                      |                                    |                                      |                                    |                                     |                                     |                                 |
|-----------------------------------|------------------------------------|--|--|------------------------------------|-------------------------------------|------------------------------------|-------------------------------------|-------------------------------------|---------------------------------------|--------------------------------------|--------------------------------------|------------------------------------|--------------------------------------|------------------------------------|-------------------------------------|-------------------------------------|---------------------------------|
| I                                 | II                                 | III  | IV                                     | V                                  | VI                                  | VII                                | VIII                                |                                     |                                       |                                      |                                      |                                    |                                      |                                    |                                     |                                     |                                 |
| 3<br><b>Li</b><br>lithium<br>7    | 4<br><b>Be</b><br>beryllium<br>9   | 1<br><b>H</b><br>hydrogen<br>1   | 5<br><b>B</b><br>boron<br>11           | 6<br><b>C</b><br>carbon<br>12      | 7<br><b>N</b><br>nitrogen<br>14     | 8<br><b>O</b><br>oxygen<br>16      | 9<br><b>F</b><br>fluorine<br>19     | 10<br><b>Ne</b><br>neon<br>20       |                                       |                                      |                                      |                                    |                                      |                                    |                                     |                                     |                                 |
| 11<br><b>Na</b><br>sodium<br>23   | 12<br><b>Mg</b><br>magnesium<br>24 | <b>Key</b><br>atomic number<br>atomic symbol<br>name<br>relative atomic mass |  |                                    |                                     |                                    |                                     |                                     |                                       |                                      |                                      |                                    |                                      |                                    |                                     |                                     |                                 |
| 19<br><b>K</b><br>potassium<br>39 | 20<br><b>Ca</b><br>calcium<br>40   | 21<br><b>Sc</b><br>scandium<br>45  | 22<br><b>Ti</b><br>titanium<br>48      | 23<br><b>V</b><br>vanadium<br>51   | 24<br><b>Cr</b><br>chromium<br>52   | 25<br><b>Mn</b><br>manganese<br>55 | 26<br><b>Fe</b><br>iron<br>56       | 27<br><b>Co</b><br>cobalt<br>59     | 28<br><b>Ni</b><br>nickel<br>59       | 29<br><b>Cu</b><br>copper<br>64      | 30<br><b>Zn</b><br>zinc<br>65        | 31<br><b>Al</b><br>aluminium<br>27 | 32<br><b>Si</b><br>silicon<br>28     | 33<br><b>P</b><br>phosphorus<br>31 | 34<br><b>S</b><br>sulfur<br>32      | 35<br><b>Cl</b><br>chlorine<br>35.5 | 36<br><b>Ar</b><br>argon<br>40  |
| 37<br><b>Rb</b><br>rubidium<br>85 | 38<br><b>Sr</b><br>strontium<br>88 | 39<br><b>Y</b><br>yttrium<br>89  | 40<br><b>Zr</b><br>zirconium<br>91     | 41<br><b>Nb</b><br>niobium<br>93   | 42<br><b>Mo</b><br>molybdenum<br>96 | 43<br><b>Tc</b><br>technetium<br>— | 44<br><b>Ru</b><br>ruthenium<br>101 | 45<br><b>Rh</b><br>rhodium<br>103   | 46<br><b>Pd</b><br>palladium<br>106   | 47<br><b>Ag</b><br>silver<br>108     | 48<br><b>Cd</b><br>cadmium<br>112    | 49<br><b>In</b><br>indium<br>115   | 50<br><b>Sn</b><br>tin<br>119        | 51<br><b>Sb</b><br>antimony<br>122 | 52<br><b>Te</b><br>tellurium<br>128 | 53<br><b>I</b><br>iodine<br>127     | 54<br><b>Xe</b><br>xenon<br>131 |
| 55<br><b>Cs</b><br>caesium<br>133 | 56<br><b>Ba</b><br>barium<br>137   | 57–71<br>lanthanoids   | 72<br><b>Hf</b><br>hafnium<br>178      | 73<br><b>Ta</b><br>tantalum<br>181 | 74<br><b>W</b><br>tungsten<br>184   | 75<br><b>Re</b><br>rhenium<br>186  | 76<br><b>Os</b><br>osmium<br>190    | 77<br><b>Ir</b><br>iridium<br>192   | 78<br><b>Pt</b><br>platinum<br>195    | 79<br><b>Au</b><br>gold<br>197       | 80<br><b>Hg</b><br>mercury<br>201    | 81<br><b>Tl</b><br>thallium<br>204 | 82<br><b>Pb</b><br>lead<br>207       | 83<br><b>Bi</b><br>bismuth<br>209  | 84<br><b>Po</b><br>polonium<br>—    | 85<br><b>At</b><br>astatine<br>—    | 86<br><b>Rn</b><br>radon<br>—   |
| 87<br><b>Fr</b><br>francium<br>—  | 88<br><b>Ra</b><br>radium<br>—     | 89–103<br>actinoids  | 104<br><b>Rf</b><br>rutherfordium<br>— | 105<br><b>Db</b><br>dubnium<br>—   | 106<br><b>Sg</b><br>seaborgium<br>— | 107<br><b>Bh</b><br>bohrium<br>—   | 108<br><b>Hs</b><br>hassium<br>—    | 109<br><b>Mt</b><br>meitnerium<br>— | 110<br><b>Ds</b><br>darmstadtium<br>— | 111<br><b>Rg</b><br>roentgenium<br>— | 112<br><b>Cn</b><br>copernicium<br>— | 114<br><b>Fl</b><br>flerovium<br>— | 116<br><b>Lv</b><br>livermorium<br>— | —                                  | —                                   | —                                   | —                               |

lanthanoids

actinoids

|                                     |                                   |  |                                     |                                    |                                    |                                    |                                      |                                   |                                      |                                     |                                  |                                      |                                     |                                     |
|-------------------------------------|-----------------------------------|--|-------------------------------------|------------------------------------|------------------------------------|------------------------------------|--------------------------------------|-----------------------------------|--------------------------------------|-------------------------------------|----------------------------------|--------------------------------------|-------------------------------------|-------------------------------------|
| 57<br><b>La</b><br>lanthanum<br>139 | 58<br><b>Ce</b><br>cerium<br>140  | 59<br><b>Pr</b><br>praseodymium<br>141 | 60<br><b>Nd</b><br>neodymium<br>144 | 61<br><b>Pm</b><br>promethium<br>— | 62<br><b>Sm</b><br>samarium<br>150 | 63<br><b>Eu</b><br>europium<br>152 | 64<br><b>Gd</b><br>gadolinium<br>157 | 65<br><b>Tb</b><br>terbium<br>159 | 66<br><b>Dy</b><br>dysprosium<br>163 | 67<br><b>Ho</b><br>holmium<br>165   | 68<br><b>Er</b><br>erbium<br>167 | 69<br><b>Tm</b><br>thulium<br>169    | 70<br><b>Yb</b><br>ytterbium<br>173 | 71<br><b>Lu</b><br>lutetium<br>175  |
| 89<br><b>Ac</b><br>actinium<br>—    | 90<br><b>Th</b><br>thorium<br>232 | 91<br><b>Pa</b><br>protactinium<br>231 | 92<br><b>U</b><br>uranium<br>238    | 93<br><b>Np</b><br>neptunium<br>—  | 94<br><b>Pu</b><br>plutonium<br>—  | 95<br><b>Am</b><br>americium<br>—  | 96<br><b>Cm</b><br>curium<br>—       | 97<br><b>Bk</b><br>berkelium<br>— | 98<br><b>Cf</b><br>californium<br>—  | 99<br><b>Es</b><br>einsteinium<br>— | 100<br><b>Fm</b><br>fermium<br>— | 101<br><b>Md</b><br>mendelevium<br>— | 102<br><b>No</b><br>nobelium<br>—   | 103<br><b>Lr</b><br>lawrencium<br>— |

The volume of one mole of any gas is 24 dm<sup>3</sup> at room temperature and pressure (r.t.p.).