



# Cambridge International AS & A Level

---

**GEOGRAPHY**

**9696/22**

Paper 2 Core Human Geography

**October/November 2020**

INSERT

**1 hour 30 minutes**

---

**INFORMATION**

- This insert contains all the resources referred to in the questions.
- You may annotate this insert and use the blank spaces for planning. **Do not write your answers** on the insert.



---

This document has 4 pages. Blank pages are indicated.

Fig. 1.1 and Fig. 1.2 for Question 1

Proportion of population aged 60 or over, by country, in 2015 and projected for 2050

Fig. 1.1

2015

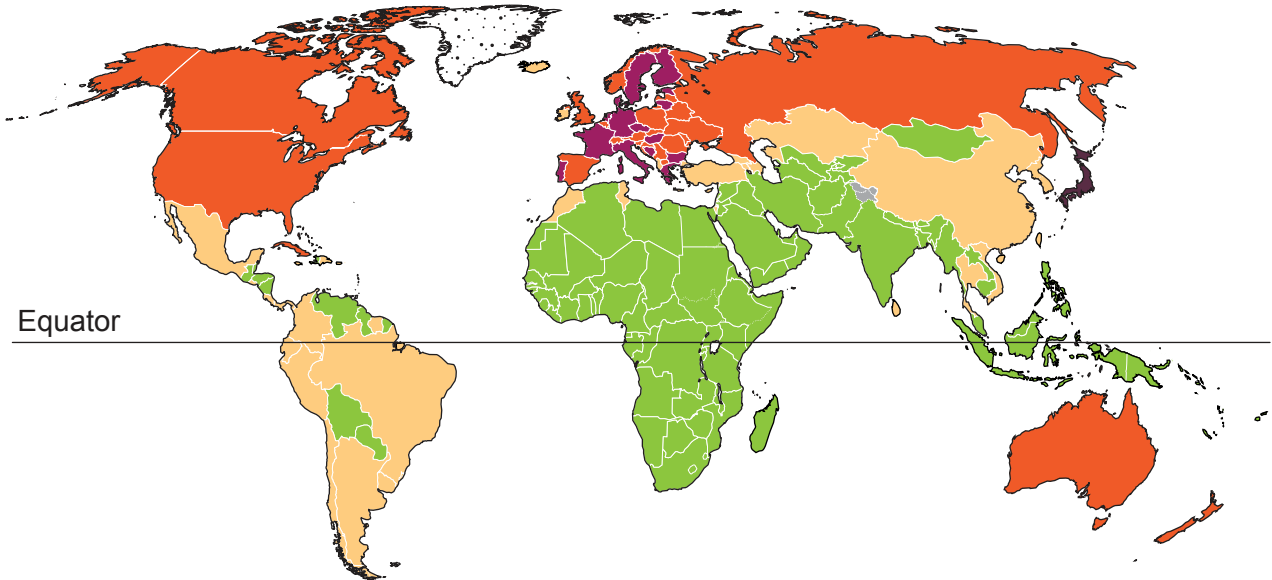
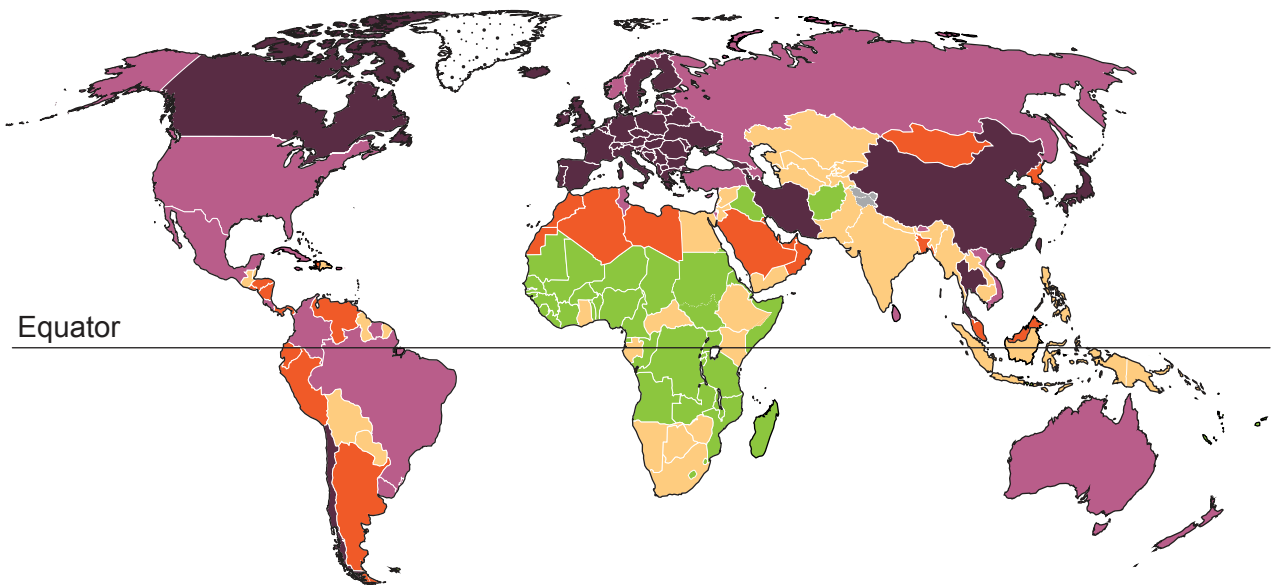


Fig. 1.2

Projected for 2050



Key

- 30+%
- 25–29%
- 20–24%
- 10–19%
- 0–9%
- no data

Fig. 2.1 for Question 2

Contribution of natural increase and net migration to population change in Europe, 1950–2019 and projected for 2020–49

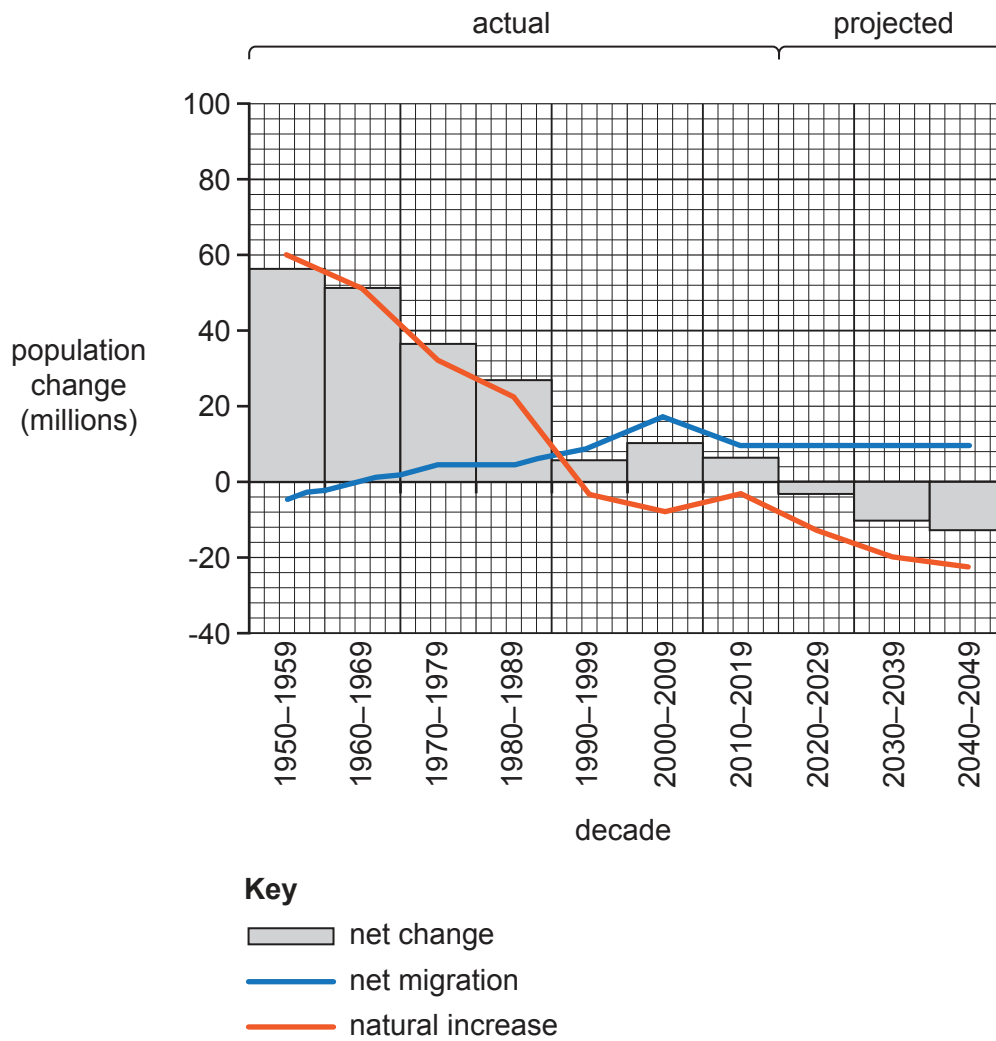
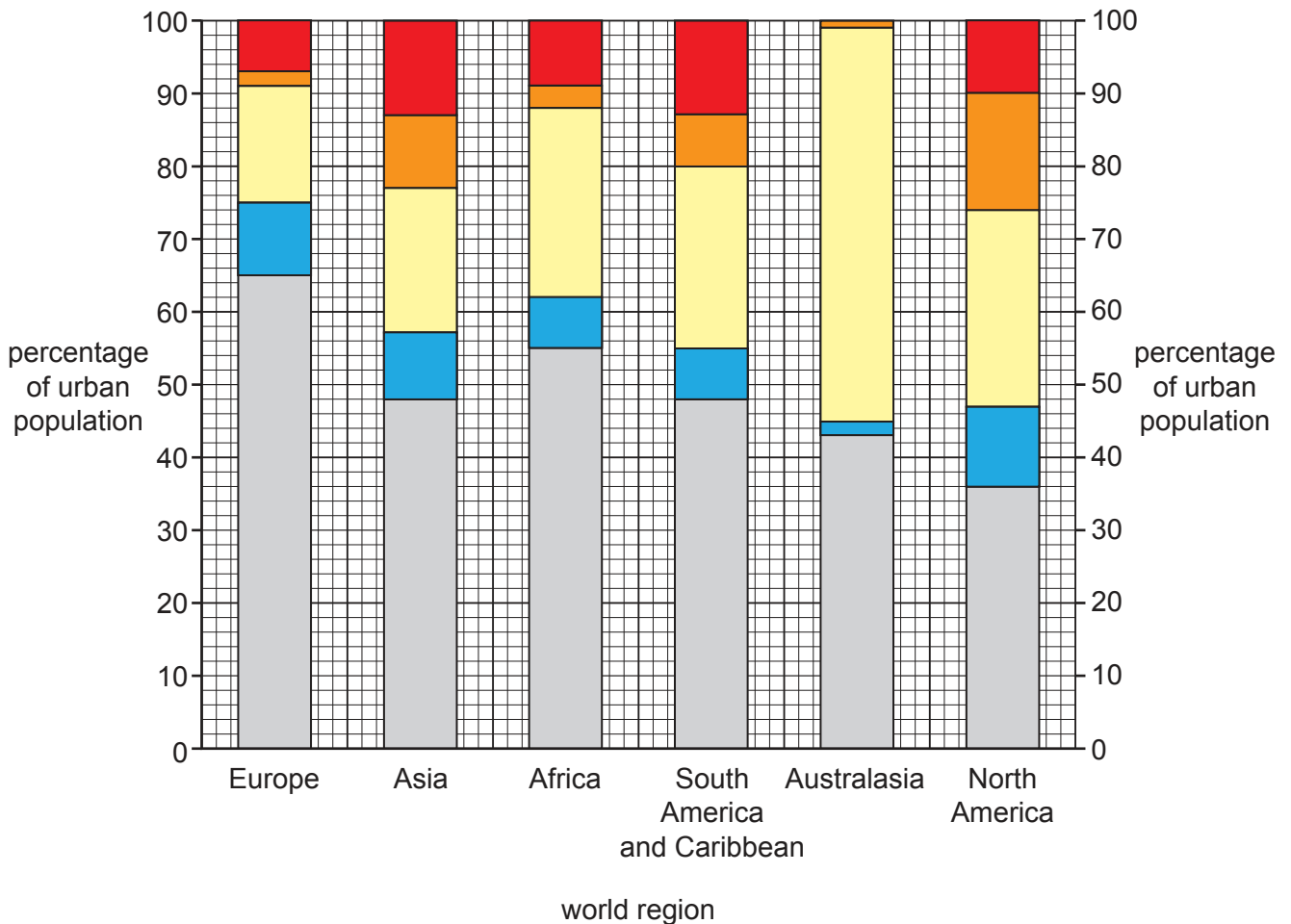


Fig. 3.1 for Question 3

## Percentage of urban population, by city size, for world regions, 2014

**Key**

city size (population number)

- megacities (10 000 000 or more)
- large cities (5 000 000 to 9 999 999)
- medium-sized cities (1 000 000 to 4 999 999)
- cities (500 000 to 999 999)
- urban areas (less than 500 000)

The boundaries and names shown, the designations used and the presentation of material on the maps contained in this question paper/insert do not imply official endorsement or acceptance by Cambridge Assessment International Education concerning the legal status of any country, territory, or area or any of its authorities, or of the delimitation of its frontiers or boundaries.

Permission to reproduce items where third-party owned material protected by copyright is included has been sought and cleared where possible. Every reasonable effort has been made by the publisher (UCLES) to trace copyright holders, but if any items requiring clearance have unwittingly been included, the publisher will be pleased to make amends at the earliest possible opportunity.

To avoid the issue of disclosure of answer-related information to candidates, all copyright acknowledgements are reproduced online in the Cambridge Assessment International Education Copyright Acknowledgements Booklet. This is produced for each series of examinations and is freely available to download at [www.cambridgeinternational.org](http://www.cambridgeinternational.org) after the live examination series.

Cambridge Assessment International Education is part of the Cambridge Assessment Group. Cambridge Assessment is the brand name of the University of Cambridge Local Examinations Syndicate (UCLES), which itself is a department of the University of Cambridge.