
GEOGRAPHY

9696/33

Paper 3 Advanced Physical Geography Options


May/June 2019

INSERT

1 hour 30 minutes

READ THESE INSTRUCTIONS FIRST

This Insert contains all the resources referred to in the questions.



This document consists of **5** printed pages and **3** blank pages.

Fig. 1.1 for Question 1

Changes in tropical vegetation with distance from the Equator

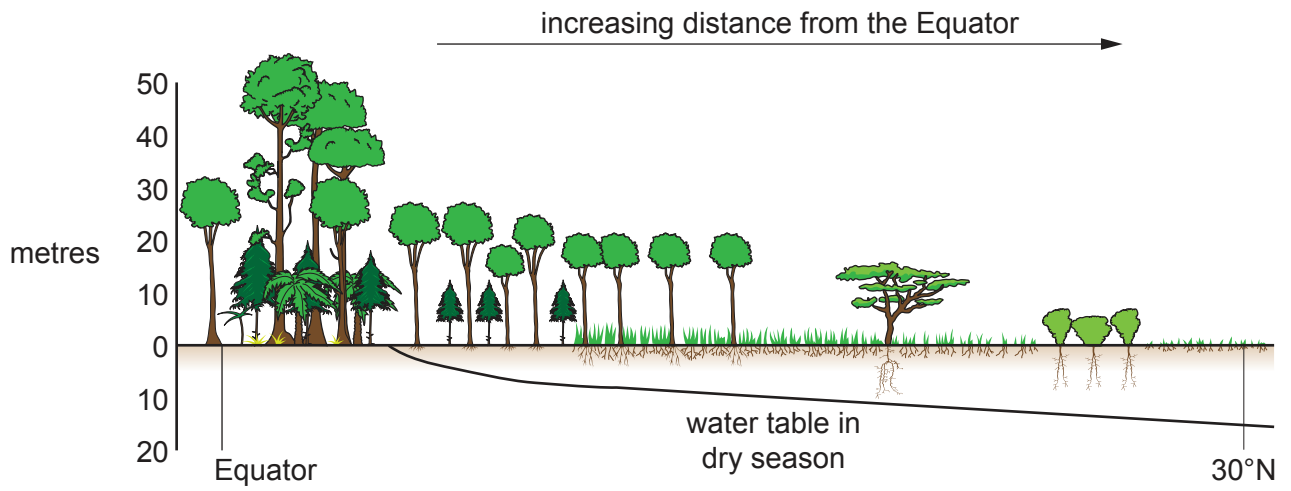
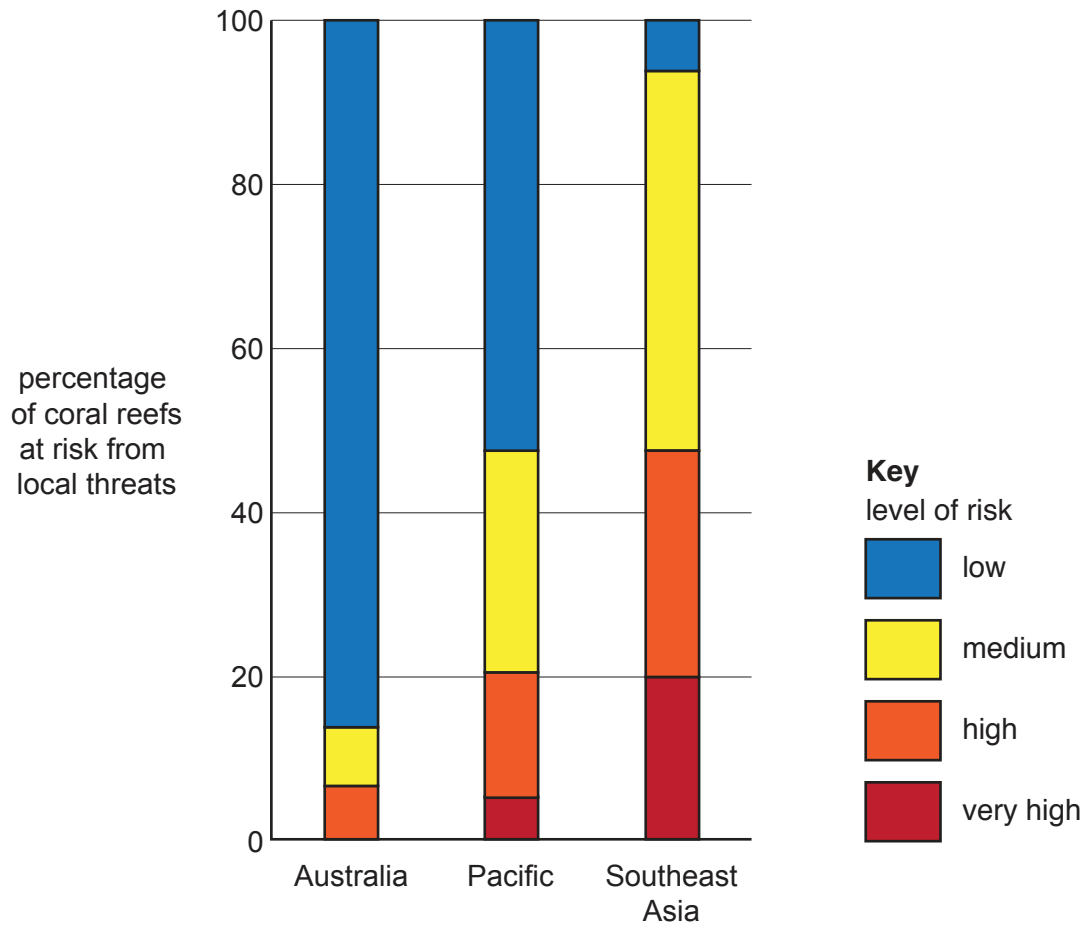


Fig. 4.1 for Question 4

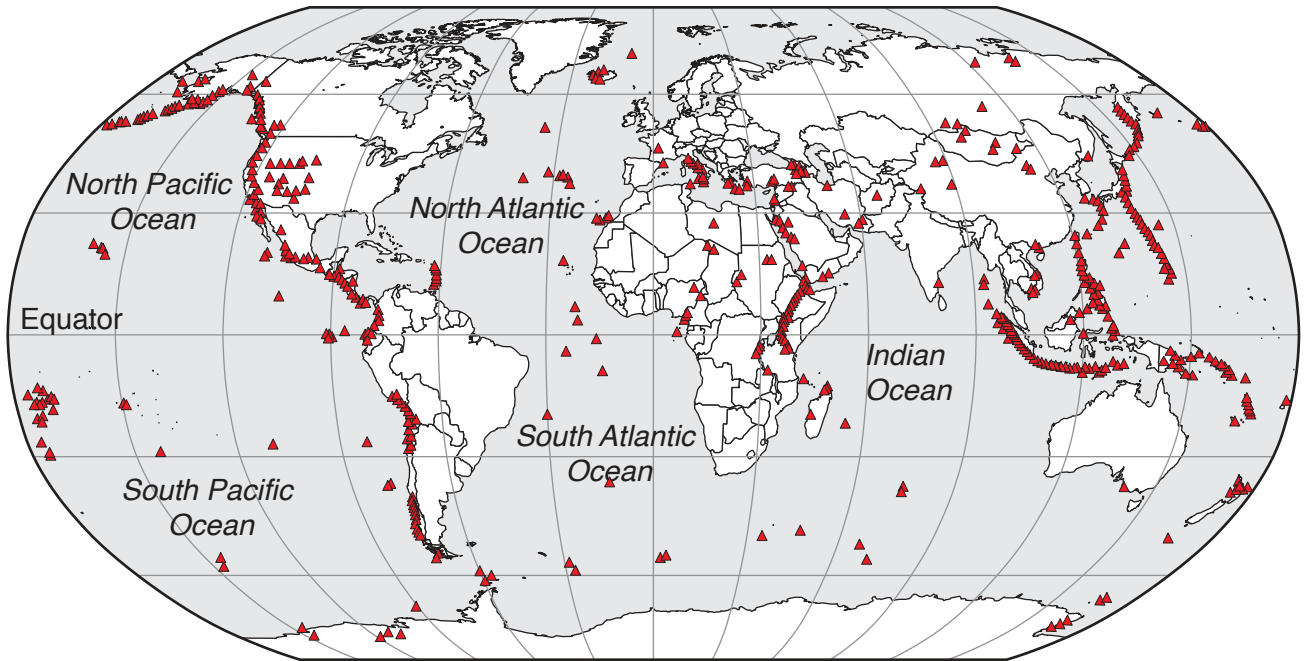
Level of risk to coral reefs from local threats for three world regions



Level of risk consists of three local threats: overfishing, pollution and physical damage.

Fig. 7.1 for Question 7

The global distribution of volcanoes



Key

- ▲ volcano

Fig. 10.1 for Question 10

Vegetation in the Sonoran Desert, USA



BLANK PAGE

Permission to reproduce items where third-party owned material protected by copyright is included has been sought and cleared where possible. Every reasonable effort has been made by the publisher (UCLES) to trace copyright holders, but if any items requiring clearance have unwittingly been included, the publisher will be pleased to make amends at the earliest possible opportunity.

To avoid the issue of disclosure of answer-related information to candidates, all copyright acknowledgements are reproduced online in the Cambridge Assessment International Education Copyright Acknowledgements Booklet. This is produced for each series of examinations and is freely available to download at www.cambridgeinternational.org after the live examination series.

Cambridge Assessment International Education is part of the Cambridge Assessment Group. Cambridge Assessment is the brand name of the University of Cambridge Local Examinations Syndicate (UCLES), which itself is a department of the University of Cambridge.