

---

**GEOGRAPHY**

**9696/12**

Paper 1 Core Geography

**May/June 2017**


INSERT

**3 hours**

---

**READ THESE INSTRUCTIONS FIRST**

This Insert contains the Photographs, Figures and the Table referred to in the questions.



---

This document consists of **7** printed pages and **1** blank page.

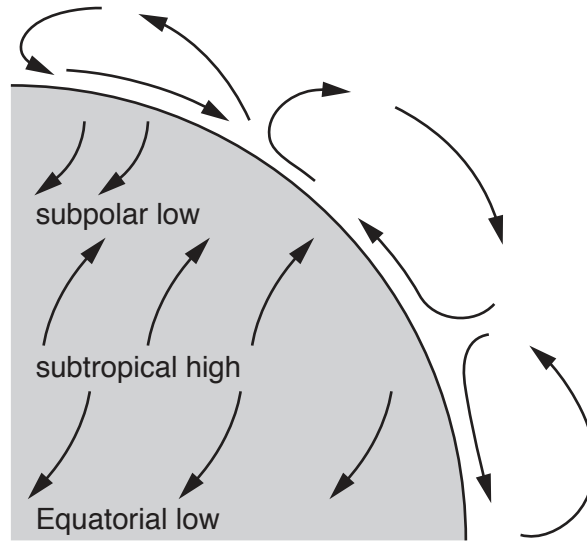
Photograph A for Question 1

A fluvial landform



Fig. 1 for Question 2

A diagram of atmospheric circulation in the Northern Hemisphere



Photograph B for Question 3

A mass movement



**Table 1 for Question 4****Average life expectancy for four continents in 1900, 2001 and 2012**

	Africa	Americas	Asia	Europe
1900	27	41	28	43
2001	51	73	67	77
2012	57	79	68	81

Fig. 2 for Question 5

## Remittance flows into Nigeria, an LEDC in Africa, 2006–2010

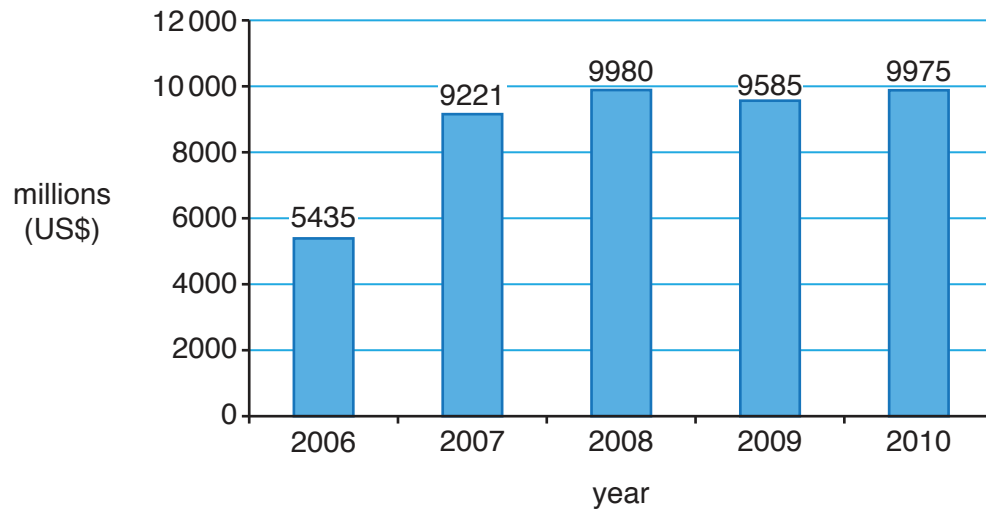
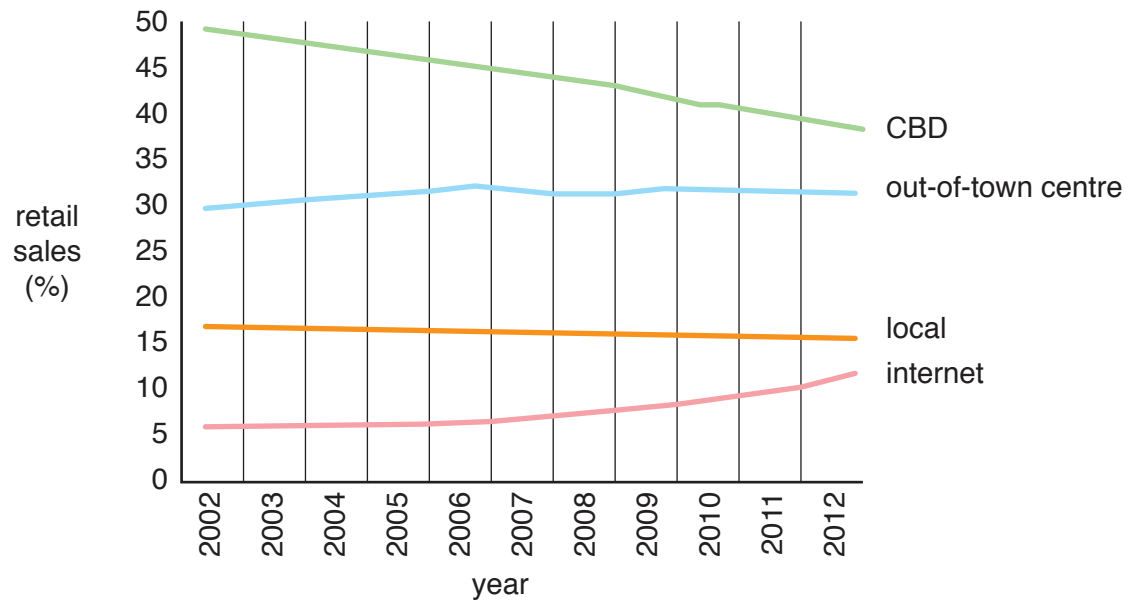


Fig. 3 for Question 6

## Sales by retail location in an MEDC, 2002–2012



**BLANK PAGE**

---

Permission to reproduce items where third-party owned material protected by copyright is included has been sought and cleared where possible. Every reasonable effort has been made by the publisher (UCLES) to trace copyright holders, but if any items requiring clearance have unwittingly been included, the publisher will be pleased to make amends at the earliest possible opportunity.

To avoid the issue of disclosure of answer-related information to candidates, all copyright acknowledgements are reproduced online in the Cambridge International Examinations Copyright Acknowledgements Booklet. This is produced for each series of examinations and is freely available to download at [www.cie.org.uk](http://www.cie.org.uk) after the live examination series.

Cambridge International Examinations is part of the Cambridge Assessment Group. Cambridge Assessment is the brand name of University of Cambridge Local Examinations Syndicate (UCLES), which is itself a department of the University of Cambridge.