



# Cambridge International AS & A Level

**CHEMISTRY**

**9701/13**

Paper 1 Multiple Choice

**October/November 2020**

**1 hour**

You must answer on the multiple choice answer sheet.

You will need: Multiple choice answer sheet  
Soft clean eraser  
Soft pencil (type B or HB is recommended)  
Data booklet

## INSTRUCTIONS

- There are **forty** questions on this paper. Answer **all** questions.
- For each question there are four possible answers **A, B, C** and **D**. Choose the **one** you consider correct and record your choice in soft pencil on the multiple choice answer sheet.
- Follow the instructions on the multiple choice answer sheet.
- Write in soft pencil.
- Write your name, centre number and candidate number on the multiple choice answer sheet in the spaces provided unless this has been done for you.
- Do **not** use correction fluid.
- Do **not** write on any bar codes.
- You may use a calculator.

## INFORMATION

- The total mark for this paper is 40.
- Each correct answer will score one mark. A mark will not be deducted for a wrong answer.
- Any rough working should be done on this question paper.

This document has **16** pages. Blank pages are indicated.



## Section A

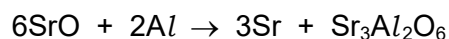
For each question there are four possible answers **A**, **B**, **C** and **D**. Choose the **one** you consider to be correct.

Use of the Data Booklet may be appropriate for some questions.

1 Which statement is correct?

- A  $Cl$  has a relative isotopic mass of 35.5.
- B  $Cl_2$  has a relative molecular mass of 70.
- C  $ICl$  has a relative molecular mass of 162.4.
- D  $NaCl$  has a relative molecular mass of 58.5.

2 Strontium metal can be extracted from strontium oxide,  $SrO$ , by reduction with aluminium. One of the possible reactions is shown.



What is the maximum mass of strontium metal that can be produced from the reduction of 100 g of strontium oxide using this reaction?

- A 41.3 g      B 42.3 g      C 84.6 g      D 169.2 g

3 A single  $^{32}P$  nucleus can be produced when a single  $^{32}S$  nucleus joins with particle X. In the process a proton is emitted.

What is particle X?

- A a deuteron,  $^2_1H^+$
- B an electron
- C a neutron
- D a proton

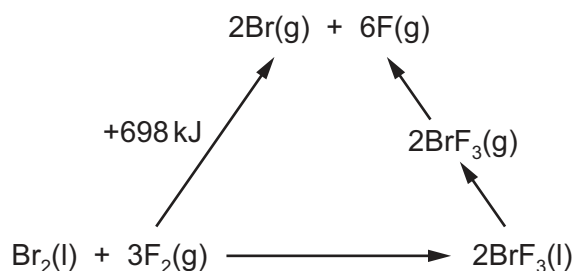
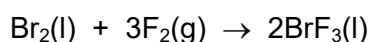
4 In which of the following, when in liquid form, are there only intermolecular forces based on temporary dipoles between the particles?

- A bromine
- B ethanol
- C hydrogen chloride
- D water

- 5 Copper has a high melting point.

What is the reason for the high melting point of copper?

- A** strong attractive forces between copper atoms only  
**B** strong attractive forces between copper ions and delocalised electrons  
**C** strong attractive forces between copper ions only  
**D** strong attractive forces between copper atoms and delocalised electrons
- 6 Which pair of standard enthalpy changes are numerically equal?
- A** atomisation of  $\text{CH}_4(\text{g})$  and formation of  $\text{CH}_4(\text{g})$   
**B** combustion of  $\text{CH}_3\text{OH}(\text{l})$  and combustion of graphite + 2(combustion of  $\text{H}_2(\text{g})$ )  
**C** combustion of graphite and formation of  $\text{CO}_2(\text{g})$   
**D** neutralisation of  $\text{HCl}(\text{aq})$  with  $\text{NaOH}(\text{aq})$  and formation of  $\text{H}_2\text{O}(\text{l})$
- 7 An energy cycle is drawn for the following reaction.



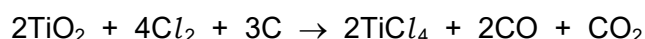
The standard enthalpy of formation of  $\text{BrF}_3(\text{l}) = -301 \text{ kJ mol}^{-1}$ .

The enthalpy change of  $\text{BrF}_3(\text{l})$  to  $\text{BrF}_3(\text{g})$  is  $+44 \text{ kJ mol}^{-1}$ .

What is the average bond energy of the Br–F bond in  $\text{BrF}_3$ ?

- A**  $152 \text{ kJ mol}^{-1}$     **B**  $202 \text{ kJ mol}^{-1}$     **C**  $304 \text{ kJ mol}^{-1}$     **D**  $404 \text{ kJ mol}^{-1}$
- 8 In which reaction does the greatest change in the oxidation number of sulfur occur?
- A**  $\text{S}(\text{s}) + \text{O}_2(\text{g}) \rightarrow \text{SO}_2(\text{g})$   
**B**  $\text{SO}_2(\text{g}) + \frac{1}{2}\text{O}_2(\text{g}) \rightleftharpoons \text{SO}_3(\text{g})$   
**C**  $\text{SO}_3(\text{g}) + \text{H}_2\text{SO}_4(\text{l}) \rightarrow \text{H}_2\text{S}_2\text{O}_7(\text{l})$   
**D**  $\text{H}_2\text{S}_2\text{O}_7(\text{l}) + \text{H}_2\text{O}(\text{l}) \rightarrow 2\text{H}_2\text{SO}_4(\text{l})$

- 9 The first stage in the chloride process for the manufacture of titanium consists of the following reaction.



What is reduced in this reaction?

- A carbon  
 B chlorine  
 C oxygen  
 D titanium
- 10 In aqueous solution, sulfuric acid dissociates as shown.

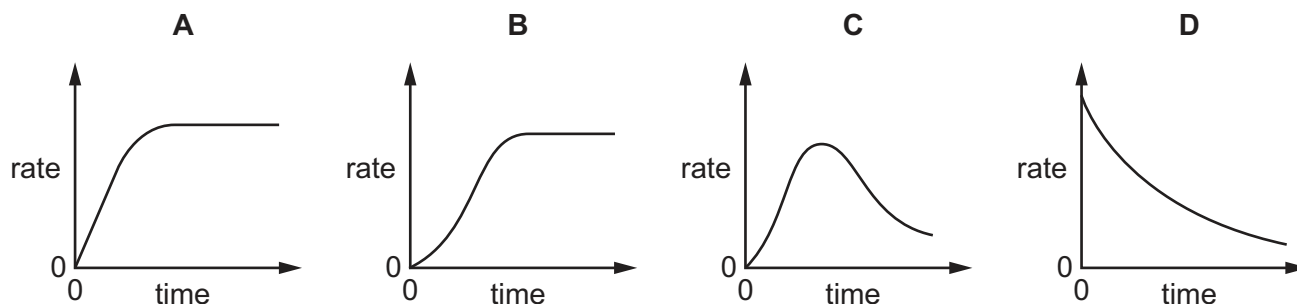


Analysis of a  $2.00 \text{ mol dm}^{-3}$  solution of  $\text{H}_2\text{SO}_4$  found the  $\text{HSO}_4^-$  concentration to be  $1.988 \text{ mol dm}^{-3}$ .

What is  $K_c$ ?

- A  $1.381 \times 10^5 \text{ dm}^3 \text{ mol}^{-1}$   
 B  $82.34 \text{ dm}^3 \text{ mol}^{-1}$   
 C  $1.214 \times 10^{-2} \text{ mol dm}^{-3}$   
 D  $7.244 \times 10^{-5} \text{ mol dm}^{-3}$
- 11 An autocatalytic reaction is a reaction in which one of the products catalyses the reaction.

Which curve would be obtained if the rate of an autocatalytic reaction is plotted against time?



12 X and Y are two elements in Period 3 of the Periodic Table. They combine to form compound Z.

X forms a soluble acidic oxide. The oxidation number of X in this oxide is +4.

Y forms an amphoteric oxide.

What is the formula of compound Z?

- A  $AlP$                       B  $Al_2S_3$                       C  $Si_2P_5$                       D  $SiS_2$

13 This question is about two elements in Group 2, Q and R.

Three of the statements shown are correct for metal Q.

The one remaining statement is correct for metal R.

Which statement applies to R?

- A A saturated solution of the hydroxide of this metal has the higher pH value.  
B This metal has a carbonate that is used in agriculture to reduce the acidity of soil.  
C This metal has the greater atomic radius.  
D This metal reacts more quickly with cold water.

14 The electronic arrangement for atoms of four elements is given.

Which element is the strongest oxidising agent?

- A  $1s^2 2s^2 2p^5$   
B  $1s^2 2s^2 2p^6 3s^2$   
C  $1s^2 2s^2 2p^6 3s^2 3p^5$   
D  $1s^2 2s^2 2p^6 3s^2 3p^6 4s^2$

15 A student mixes pairs of chemicals together in separate test-tubes.

- excess calcium (s) + water (l)
- barium chloride (aq) + strontium hydroxide (aq)
- calcium carbonate (s) + excess hydrochloric acid (aq)
- magnesium sulfate (aq) + barium nitrate (aq)

How many of the mixtures produce a white, solid product?

- A 0                      B 1                      C 2                      D 3

16 With which compound does concentrated sulfuric acid react **both** as a strong acid **and** as an oxidising agent?

- A magnesium carbonate
- B potassium chloride
- C sodium bromide
- D sulfur trioxide

17 Ammonia can undergo an acid–base reaction with hydrogen chloride to form ammonium chloride.

Which statement is correct?

- A The ammonium ion is basic.
- B The hydrogen atom from  $\text{HCl}$  donates a lone pair of electrons to the nitrogen atom.
- C The  $\text{H–N–H}$  bond angle in ammonia is the same as the  $\text{H–N–H}$  bond angle in the ammonium ion.
- D The  $\text{H–N–H}$  bond angle in the ammonium ion is the same as the  $\text{H–C–H}$  bond angle in methane.

18 What are the trends in the stated properties as Group 2 is descended from magnesium to barium?

	decomposition temperature of the carbonate	first ionisation energy
A	decreases	increases
B	decreases	decreases
C	increases	increases
D	increases	decreases

19 Sulfur dioxide,  $\text{SO}_2$ , reacts with calcium hydroxide in aqueous solution.

What is the main product that is first formed?

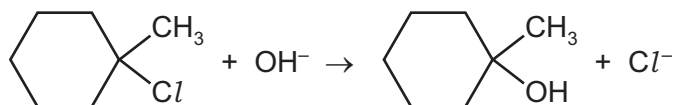
- A  $\text{Ca}(\text{HSO}_4)_2$     B  $\text{CaS}$     C  $\text{CaSO}_3$     D  $\text{CaSO}_4$



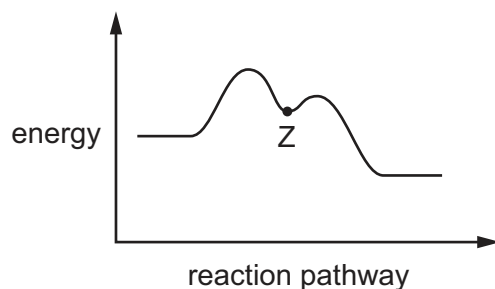
- 24 A student converts 1-iodopropane,  $C_3H_7I$ , into butanoic acid,  $C_3H_7CO_2H$ , by a two-stage chemical synthesis.

In the **first** of the two stages, which reagent is reacted with 1-iodopropane?

- A aqueous sodium hydroxide  
 B ethanolic ammonia  
 C ethanolic potassium cyanide  
 D ethanolic sodium hydroxide
- 25 1-chloro-1-methylcyclohexane is hydrolysed by heating with  $NaOH(aq)$ .



The reaction pathway is shown.



One carbon atom in 1-chloro-1-methylcyclohexane is bonded to three other carbon atoms.

What is the charge on this carbon atom at point Z?

- A 1-                      B  $\delta-$                       C  $\delta+$                       D 1+
- 26 An alcohol with the molecular formula  $C_5H_{12}O$  decolourises warm acidified potassium manganate(VII). The alcohol also gives a yellow precipitate with alkaline aqueous iodine.

What could be the identity of the alcohol?

- A 2-methylbutan-2-ol  
 B 3-methylbutan-2-ol  
 C pentan-1-ol  
 D pentan-3-ol

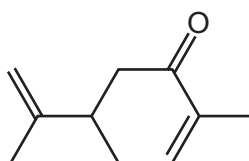


27 Which pair of test results would prove that a substance, X, is a ketone?

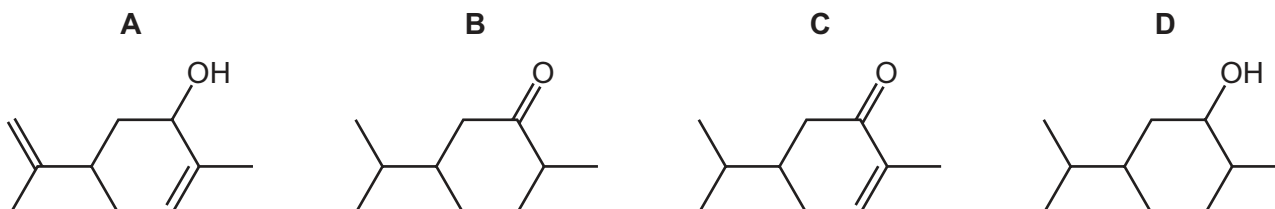
- A** X has no reaction with Tollens' reagent. X reacts with alkaline aqueous iodine.  
**B** X is reduced by lithium aluminium hydride. X is oxidised by acidified dichromate(VI).  
**C** X reacts with 2,4-DNPH reagent. X has no reaction with Fehling's reagent.  
**D** X reacts with hydrogen cyanide. X is reduced by lithium aluminium hydride.

28 Carvone is found in spearmint oil.

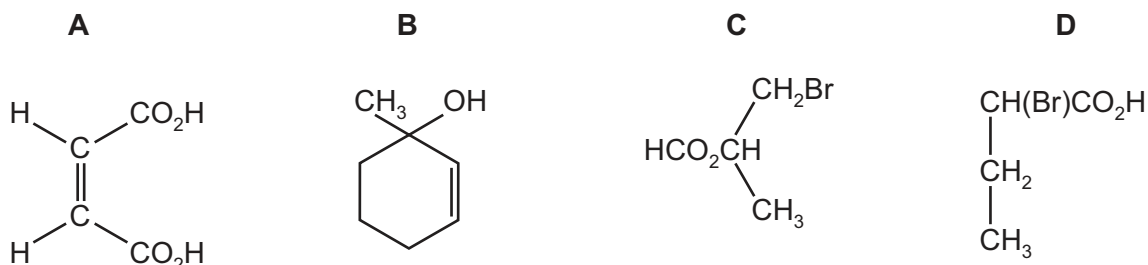
carvone



Which product is formed when carvone is reacted with  $\text{NaBH}_4$ ?

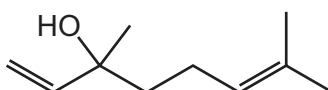


29 Which compound is chiral and reacts with  $\text{Na}_2\text{CO}_3$  to give  $\text{CO}_2$ ?



30 The skeletal formula of compound X is shown.

compound X



What is the molecular formula of compound X?

- A**  $\text{C}_{10}\text{H}_{18}\text{O}$       **B**  $\text{C}_{10}\text{H}_{20}\text{O}$       **C**  $\text{C}_{11}\text{H}_{22}\text{O}$       **D**  $\text{C}_{11}\text{H}_{24}\text{O}$

## Section B

For each of the questions in this section, one or more of the three numbered statements 1 to 3 may be correct.

Decide whether each of the statements is or is not correct (you may find it helpful to put a tick against the statements that you consider to be correct).

The responses **A** to **D** should be selected on the basis of

<b>A</b>	<b>B</b>	<b>C</b>	<b>D</b>
1, 2 and 3 are correct	1 and 2 only are correct	2 and 3 only are correct	1 only is correct

No other combination of statements is used as a correct response.

Use of the Data Booklet may be appropriate for some questions.

**31** Nitrogen forms a number of oxides. Their enthalpies of formation are given.

$$\Delta H_f^\ominus[\text{NO}(\text{g})] = +90 \text{ kJ mol}^{-1}$$

$$\Delta H_f^\ominus[\text{N}_2\text{O}(\text{g})] = +82 \text{ kJ mol}^{-1}$$

$$\Delta H_f^\ominus[\text{NO}_2(\text{g})] = +33 \text{ kJ mol}^{-1}$$

Which statements are correct?

- 1 If  $\text{N}_2\text{O}(\text{g})$  is oxidised by  $\text{O}_2(\text{g})$  to  $\text{NO}_2(\text{g})$ , 16 kJ is released per mole of  $\text{N}_2\text{O}$ .
- 2 The decomposition of  $\text{N}_2\text{O}(\text{g})$  to  $\text{N}_2(\text{g})$  and  $\text{O}_2(\text{g})$  is exothermic.
- 3 The reaction between NO and oxygen is exothermic.

**32** Which statements are correct?

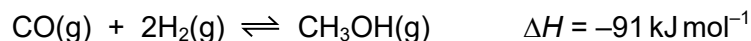
- 1 enthalpy of combustion of  $\text{H}_2$  = enthalpy of formation of  $\text{H}_2\text{O}$
- 2 enthalpy of formation of  $\text{H}_2$  =  $-(\text{enthalpy of atomisation of } \text{H}_2)$
- 3 enthalpy of solution of  $\text{HCl}$  = enthalpy of hydration of  $\text{H}^+$  + enthalpy of hydration of  $\text{Cl}^-$

**33** The units of  $K_c$  for an equilibrium reaction are  $\text{mol}^{-1} \text{ dm}^3$ .

What could be the equation for the equilibrium?

- 1  $\text{A}(\text{aq}) + \text{B}(\text{aq}) \rightleftharpoons \text{C}(\text{s}) + \text{D}(\text{aq})$
- 2  $\text{P}(\text{aq}) + \text{Q}(\text{aq}) \rightleftharpoons \text{R}(\text{aq})$
- 3  $\text{W}(\text{aq}) + 2\text{X}(\text{aq}) \rightleftharpoons \text{Y}(\text{aq}) + \text{Z}(\text{aq})$

34 Methanol,  $\text{CH}_3\text{OH}$ , can be produced industrially by reacting  $\text{CO}$  with  $\text{H}_2$ .



The process can be carried out at  $4 \times 10^3 \text{ kPa}$  and  $1150 \text{ K}$ .

Which statements about this reaction are correct?

- 1 Increasing the temperature will increase the rate of reaction because more effective collisions will occur.
- 2 Lowering the temperature will reduce the rate of reaction because the forward reaction is exothermic.
- 3 Increasing the pressure will reduce the rate of reaction because there are a larger number of moles on the left-hand side of the equation.

35 Which rows correctly show the relative electrical conductivities of the sets of three Period 3 elements?

	greatest conductivity	→	least conductivity
1	sodium	silicon	chlorine
2	aluminium	magnesium	phosphorus
3	sulfur	silicon	phosphorus

36 Three test-tubes, X, Y and Z, each contain water.

- A small amount of  $\text{NaCl}$  is added to test-tube X.
- A small amount of  $\text{SiCl}_4$  is added to test-tube Y.
- A small amount of  $\text{AlCl}_3$  is added to test-tube Z.

After a short time, two drops of universal indicator solution are added to each test-tube.

Which statements can be correct?

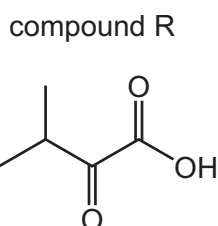
- 1 The pH in test-tube X is 7.
- 2 The pH in test-tube Y is 2.
- 3 The pH in test-tube Z is 2.

The responses **A** to **D** should be selected on the basis of

<b>A</b>	<b>B</b>	<b>C</b>	<b>D</b>
1, 2 and 3 are correct	1 and 2 only are correct	2 and 3 only are correct	1 only is correct

No other combination of statements is used as a correct response.

37 The structure of compound R is shown.



Which statements about compound R are correct?

- 1 It has an  $M_r$  of 116.
  - 2 It contains two groups that show strong absorptions between  $1640$  and  $1740\text{ cm}^{-1}$  in its infrared spectrum.
  - 3 Its only infrared absorption between  $2500$  and  $3000\text{ cm}^{-1}$  is sharp and strong.
- 38 During the bromination of methane, the free radical  $\text{CH}_3\cdot$  is generated. A possible termination step of this reaction is the formation of  $\text{C}_2\text{H}_6$  by the combination of two free radicals.

What could be produced in a termination step during the bromination of **propane**?

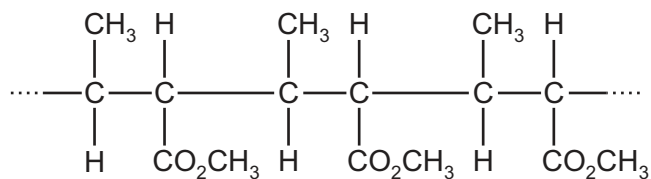
- 1  $\text{CH}_3\text{CH}_2\text{CH}(\text{CH}_3)\text{CH}_2\text{CH}_3$
- 2  $\text{CH}_3\text{CH}(\text{CH}_3)\text{CH}(\text{CH}_3)_2$
- 3  $\text{CH}_3\text{CH}_2\text{CH}_2\text{CH}(\text{CH}_3)_2$

39 Three reactions of primary alcohols are listed.

Which reactions give water as one of the products?

- 1 reaction with ethanoic acid
- 2 reaction with concentrated HBr
- 3 passing the alcohol vapour over heated  $Al_2O_3$

40 The diagram shows part of the structure of polymer X.



Which reagents react with polymer X?

- 1 aqueous sulfuric acid
- 2 aqueous sodium hydroxide
- 3 sodium





**BLANK PAGE**

---

Permission to reproduce items where third-party owned material protected by copyright is included has been sought and cleared where possible. Every reasonable effort has been made by the publisher (UCLES) to trace copyright holders, but if any items requiring clearance have unwittingly been included, the publisher will be pleased to make amends at the earliest possible opportunity.

To avoid the issue of disclosure of answer-related information to candidates, all copyright acknowledgements are reproduced online in the Cambridge Assessment International Education Copyright Acknowledgements Booklet. This is produced for each series of examinations and is freely available to download at [www.cambridgeinternational.org](http://www.cambridgeinternational.org) after the live examination series.

Cambridge Assessment International Education is part of the Cambridge Assessment Group. Cambridge Assessment is the brand name of the University of Cambridge Local Examinations Syndicate (UCLES), which itself is a department of the University of Cambridge.